

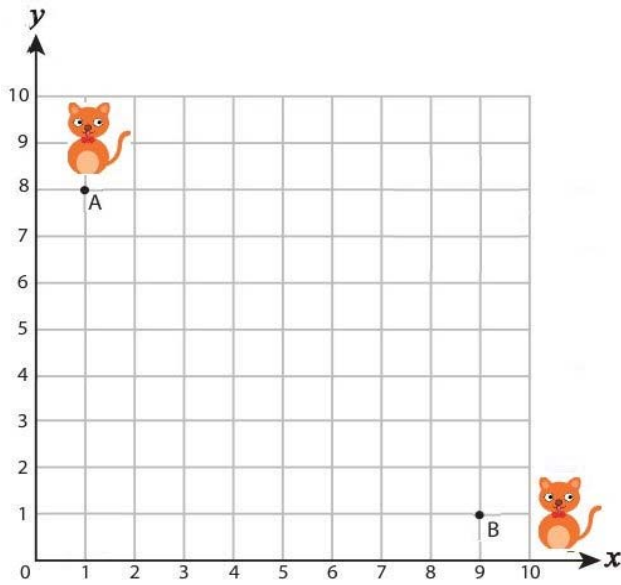
Showing Routes Practice Worksheet 1

Name _____

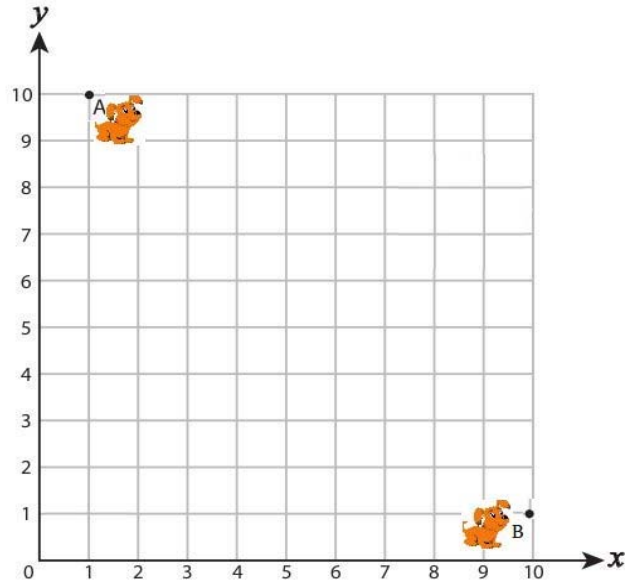
Score _____

Help each animal reach their friend by plotting the points and connecting them with the lines.

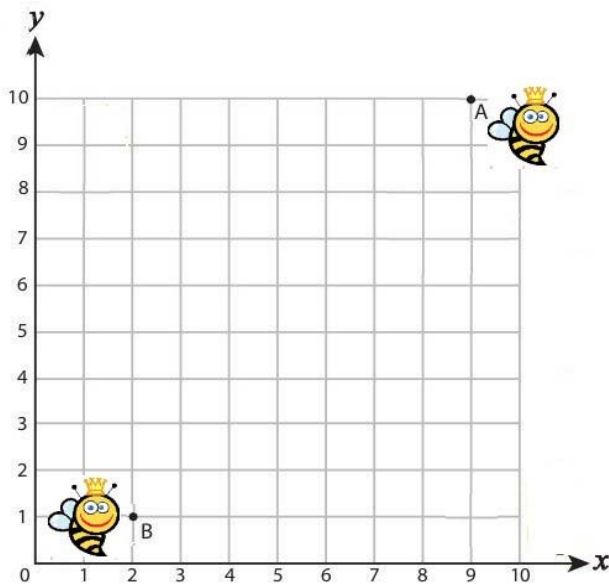
1) $(4, 8)$, $(4, 5)$, $(5, 5)$, $(5, 1)$



2) $(1, 7)$, $(5, 7)$, $(5, 6)$, $(8, 6)$, $(8, 3)$, $(10, 3)$



3) $(2, 3)$, $(6, 3)$, $(6, 6)$, $(8, 6)$, $(8, 10)$



4) $(3, 1)$, $(3, 5)$, $(5, 5)$, $(5, 6)$, $(9, 6)$

