

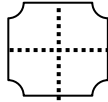
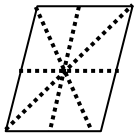
Name _____

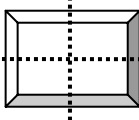
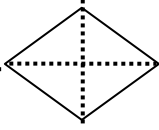
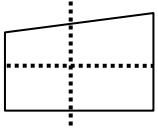
Date _____

Symmetry - Matching Worksheet

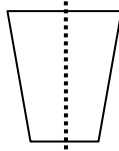
Write the letter of the answer that matches the problem.

1. How many lines of symmetry does each figure have?



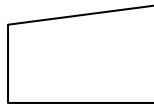
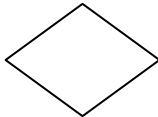
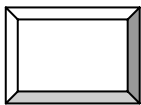
a.   

2. Is the dashed line a line of symmetry? Write yes or no.



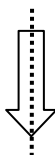
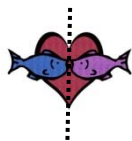
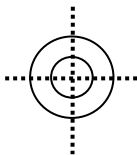
b.

3. Draw the lines of symmetry. Write how many there are.



c.

4. How many lines of symmetry does each figure have?



d.

