

Name \_\_\_\_\_

Date \_\_\_\_\_

## Lines of Symmetry Lesson and Practice

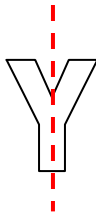
Answer the following:

Does the figure have a line of symmetry?





Yes \_\_\_ No \_\_\_

Yes, the figure given above has 1 line of symmetry which can be drawn vertically through it.



Answer: Yes

### Practice Problems

1	Does the figure have a line of symmetry?  Yes ___ No ___	2	Does the figure have a line of symmetry?  Yes ___ No ___
---	---	---	---

