

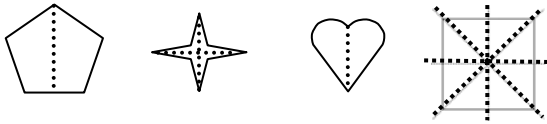
Name \_\_\_\_\_

Date \_\_\_\_\_

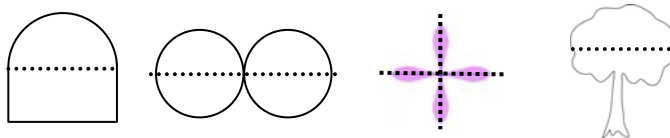
## Symmetry - Independent Practice Worksheet

Complete all the problems.

1. How many lines of symmetry does each figure have?



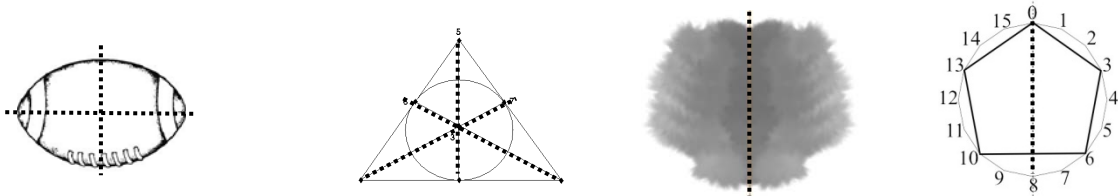
2. Is the dashed line a line of symmetry? Write yes or no.



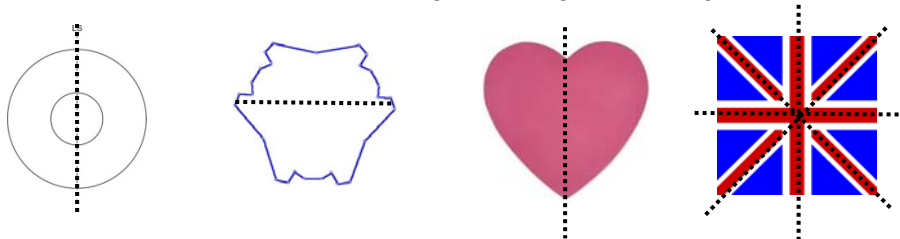
3. Draw the lines of symmetry. Write how many there are.



4. How many lines of symmetry does each figure have?



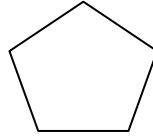
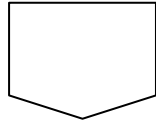
5. Is the dashed line a line of symmetry? Write yes or no.



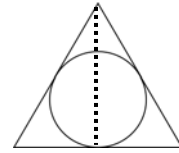
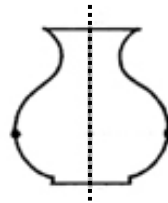
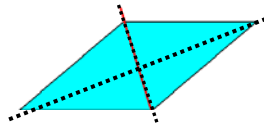
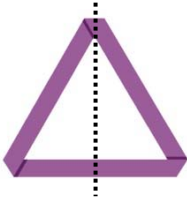
Name \_\_\_\_\_

Date \_\_\_\_\_

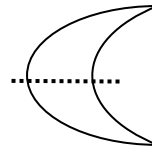
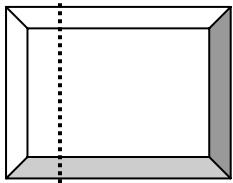
6. Draw the lines of symmetry. Write how many there are.



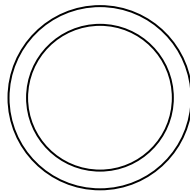
7. How many lines of symmetry does each figure have?



8. Is the dashed line a line of symmetry? Write yes or no.



9. Draw the lines of symmetry. Write how many there are.



10. How many lines of symmetry does each figure have?

