


Name _____

Date _____

Finding Half (Symmetry in Numbers) Lesson

Find half of the total:

<p>24</p> 	<p>___ + ___ = ___</p> <p>1 / 2 of ___ is ___</p>
---	---

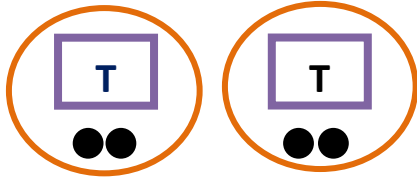
Here T = 10

1 dot = 1, 2 dots = 2 and so on.



Add those values i.e. 10 + 2 = 12

There are 2 groups of 12.

Adding these 2 groups and filling the blanks in the question above,

<p>24</p> 	<p><u> 12 </u> + <u> 12 </u> = <u> 24 </u></p> <p>1 / 2 of <u> 24 </u> is <u> 12 </u></p>
---	---

Practice Problems

1	<p>40</p> 	<p>___ + ___ = ___</p> <p>1 / 2 of ___ is ___</p>
2	<p>26</p> 	<p>___ + ___ = ___</p> <p>1 / 2 of ___ is ___</p>

