

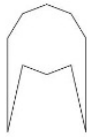
Name _____

Date _____

Classify and Identify Regular Polygons - Matching Worksheet

Write the letter of the answer that matches the problem.

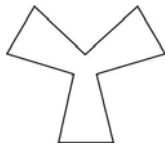
1.



sides _____ angles _____

name _____

2.



sides _____ angles _____

name _____

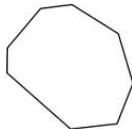
3.



sides _____ angles _____

name _____

4.



sides _____ angles _____

name _____

5.



sides _____ angles _____

name _____

a.

Sides 8

Angles 8

Name

Octagon

b.

Sides 5

Angles 5

Name

Pentagon

c.

Sides 10

Angles 10

Name

Decagon

d.

Sides 7

Angles 7

Name

Heptagon

e.

Sides 9

Angles 9

Name

Nonagon

