

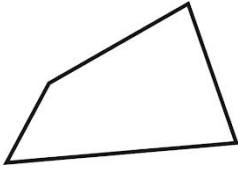
Name _____

Date _____

Classify and Identify Regular Polygons - Independent Practice Worksheet

Write the number of sides, angles, and name of each polygon.

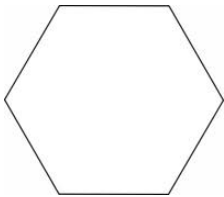
1.



sides _____ angles _____

name _____

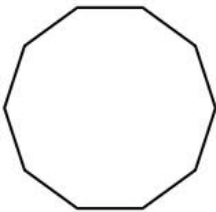
2.



sides _____ angles _____

name _____

3.



sides _____ angles _____

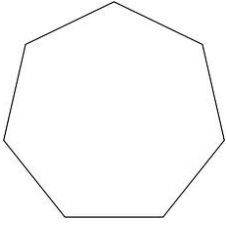
name _____



Name _____

Date _____

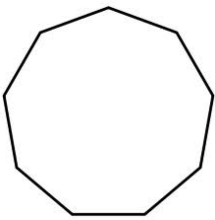
4.



sides _____ angles _____

name _____

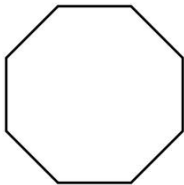
5.



sides _____ angles _____

name _____

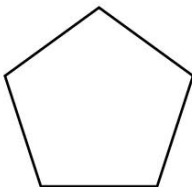
6.



sides _____ angles _____

name _____

7.



sides _____ angles _____


name _____



Name _____

Date _____

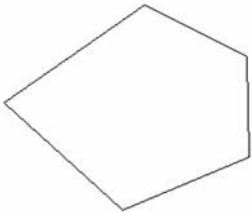
8.



sides _____ angles _____

name _____


9.



sides _____ angles _____

name _____

10.



sides _____ angles _____

name _____

