

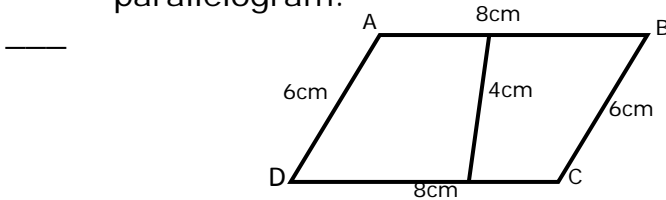
Name _____

Date _____

Area and Perimeter of Triangles, Parallelograms and Trapezoids - Matching Worksheet

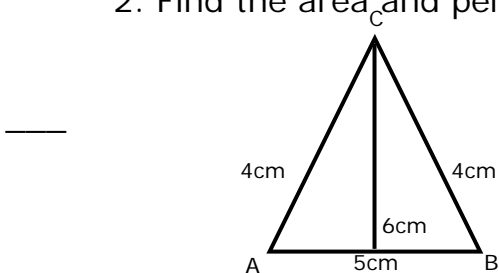
Write the letter of the answer that matches the problem.

1. Find the area and perimeter of parallelogram.



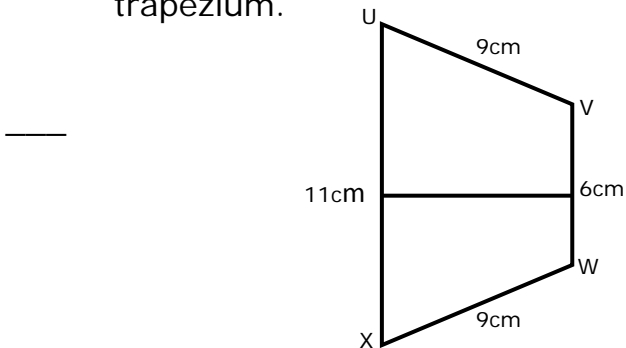
a. $P=24\text{cm}$, $A= 42\text{cm}$

2. Find the area and perimeter of triangle.



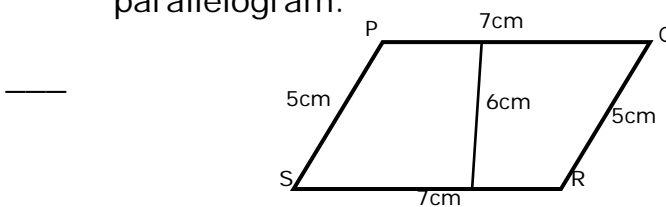
b. $P=35\text{cm}$, $A= 24\text{cm}$

3. Find the area and perimeter of trapezium.



c. $P=13\text{cm}$, $A= 15\text{cm}$

4. Find the area and perimeter of parallelogram.



d. $P=28\text{cm}$, $A= 32\text{cm}$

