

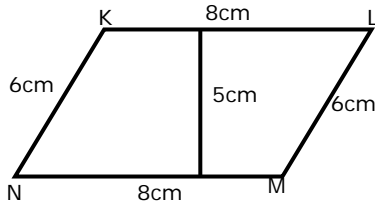
Name \_\_\_\_\_

Date \_\_\_\_\_

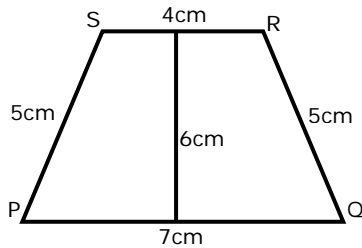
## Area and Perimeter of Triangles, Parallelograms and Trapezoids - Independent Practice Worksheet

Complete all the problems.

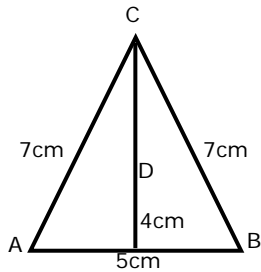
1. Find the area and perimeter of parallelogram.



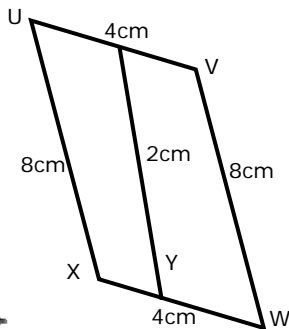
2. Find the area and perimeter of trapezium.



3. Find the area and perimeter of triangle.



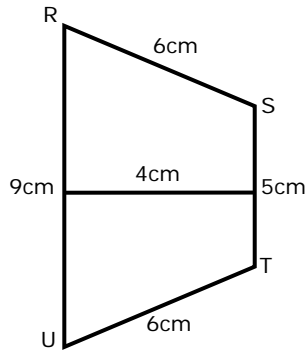
4. Find the area and perimeter of parallelogram.



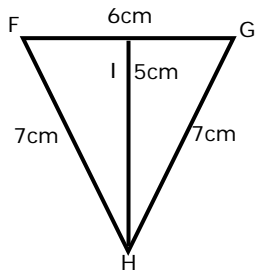
Name \_\_\_\_\_

Date \_\_\_\_\_

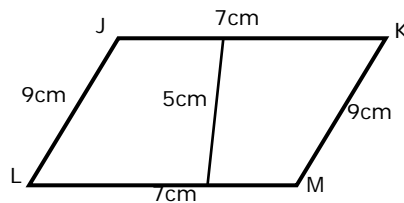
5. Find the area and perimeter of trapezium.



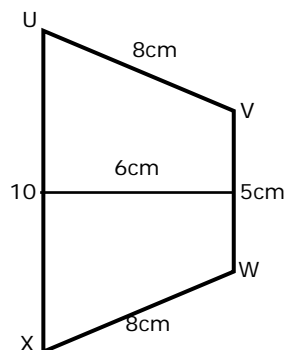
6. Find the area and perimeter of triangle.



7. Find the area and perimeter of parallelogram.



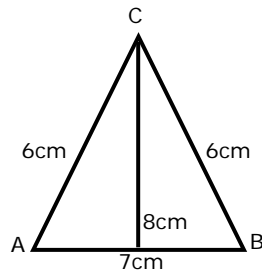
8. Find the area and perimeter of trapezium.



Name \_\_\_\_\_

Date \_\_\_\_\_

9. Find the area and perimeter of triangle.



10. Find the area and perimeter of parallelogram.

