

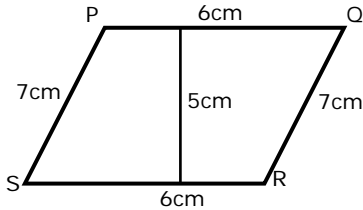
Name \_\_\_\_\_

Date \_\_\_\_\_

**Area and Perimeter of Triangles, Parallelograms and Trapezoids - Guided Lesson:**

Complete the following problems:

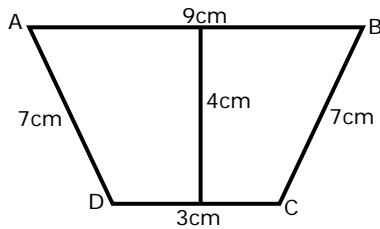
1) Find the area and perimeter of parallelogram.



Perimeter = \_\_\_\_\_

Area = \_\_\_\_\_

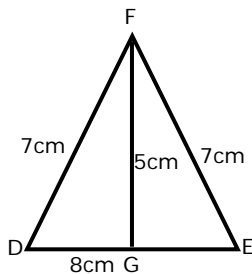
2) Find the area and perimeter of trapezium.



Perimeter = \_\_\_\_\_

Area = \_\_\_\_\_

3) Find the area and perimeter of triangle.



Perimeter = \_\_\_\_\_

Area = \_\_\_\_\_

