

Name: _____

Date _____

Topic: Point Symmetry- Worksheet 1

Does each figure have point symmetry?



Yes

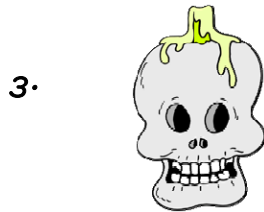
No

2.



Yes

No



Yes

No

4.



Yes

No


5. Does the word **RON** possess point symmetry?

6.



Yes


No



Yes


No

8.



Yes

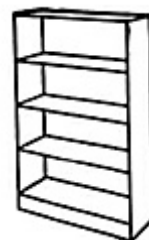
No



Yes

No

10.



Yes

No

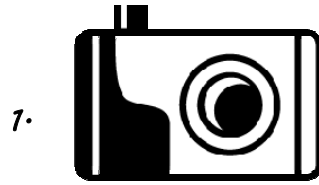


Name: _____

Date _____

Topic: Point Symmetry- Worksheet 2

Does each figure have point symmetry?



Yes

No



Yes

No



Yes


No



Yes

No

5. Does the word **MOM** possess point symmetry?



Yes

No



Yes

No



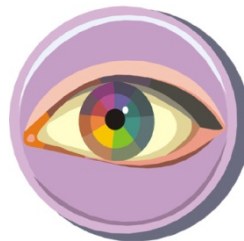
Yes

No



Yes

No



Yes

No



Name: _____

Date _____

Topic: Point Symmetry- Worksheet 3

Does each figure have point symmetry?

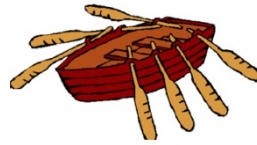
1.



Yes

No

2.



Yes

No

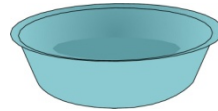
3.



Yes

No

4.



Yes

No

5.

Does the word **NOT** possess point symmetry?

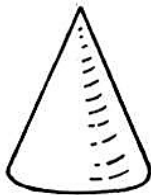
6.



Yes

No

7.



Yes

No

8.



Yes

No

9.



Yes

No

10.



Yes

No




Name: _____

Date _____


Topic: Point Symmetry- Worksheet 4

Does each figure have point symmetry?



Yes

No



Yes

No



Yes

No



Yes

No

5. Does the word **DON** possess point symmetry?



Yes

No



Yes

No




Yes

No



Yes

No



Yes

No




Name: _____

Date _____

Topic: Point Symmetry- Worksheet 5

Does each figure have point symmetry?



5. Does the word **POP** possess point symmetry?

