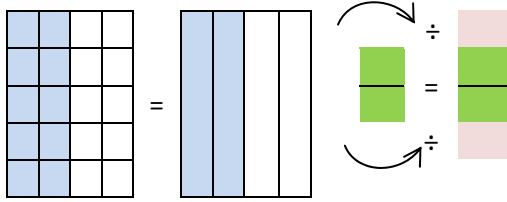
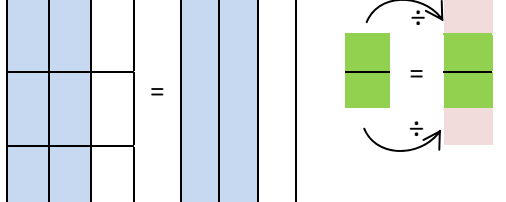
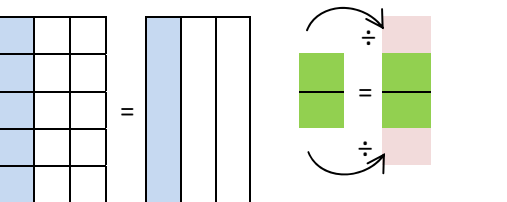
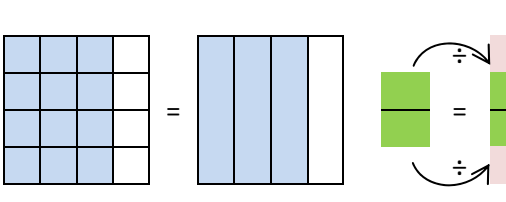
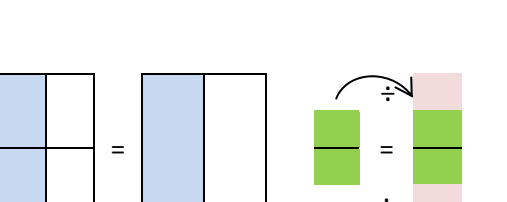
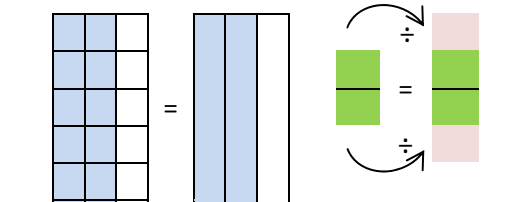
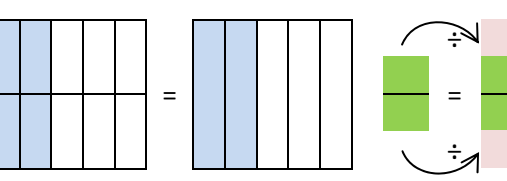
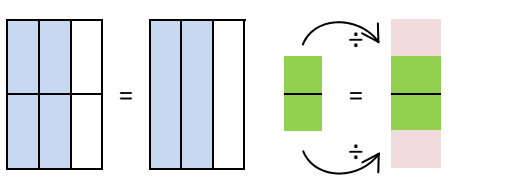
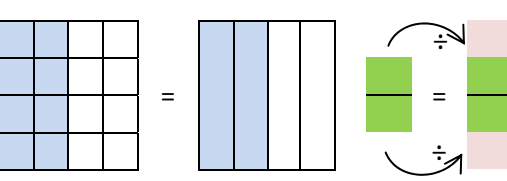


Name _____

Date _____

Simplifying Visual Fractions Worksheet

Write down the simplification, and reduce the expression to its lowest term.

1	<p>The parts are joined together in _____</p> 	2	<p>The parts are joined together in _____</p> 
3	<p>The parts are joined together in _____</p> 	4	<p>The parts are joined together in _____</p> 
5	<p>The parts are joined together in _____</p> 	6	<p>The parts are joined together in _____</p> 
7	<p>The parts are joined together in _____</p> 	8	<p>The parts are joined together in _____</p> 
9	<p>The parts are joined together in _____</p> 	10	<p>The parts are joined together in _____</p> 