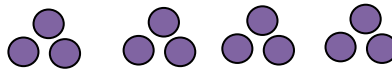


The Relationship of Fractions and Integers Worksheet

Divide into four different groups. Write a division sentence and a part sentence, finding $\frac{1}{4}$ th of the total. The box with a 'T' is a ten.

1

12

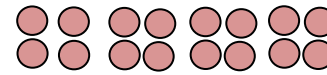


____ \div 4 = ____

$\frac{1}{4}$ of 12 is ____

2

16




____ \div 4 = ____

$\frac{1}{4}$ of 16 is ____

3

4




____ \div 4 = ____

$\frac{1}{4}$ of 4 is ____

4

8




____ \div 4 = ____

$\frac{1}{4}$ of 8 is ____

5

12

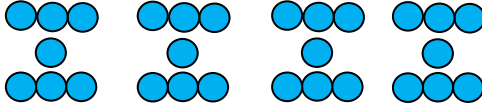


____ \div 4 = ____

$\frac{1}{4}$ of 12 is ____

6

28




____ \div 4 = ____

$\frac{1}{4}$ of 28 is ____

7

20




____ \div 4 = ____

$\frac{1}{4}$ of 20 is _

8

24




____ \div 4 = ____

$\frac{1}{4}$ of 24 is ____

9

40




____ \div 4 = ____

$\frac{1}{4}$ of 40 is _

10

8



____ \div 4 = ____

$\frac{1}{4}$ of 8 is ____

