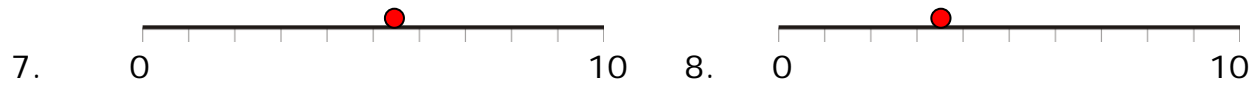
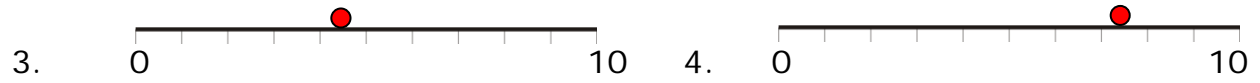


Name _____

Date _____

Topic: Estimate on a Number Line - Worksheet 1

Directions: Write what number is half-way between the two numbers.



Name _____

Date _____

Topic: Estimate on a Number Line - Worksheet 1 **ANSWERS**

Directions: Write what number is half-way between the two numbers.

1. **4**
2. **14**
3. **5**
4. **8**
5. **6**
6. **3**
7. **6**
8. **4**
9. **7**
10. **15**

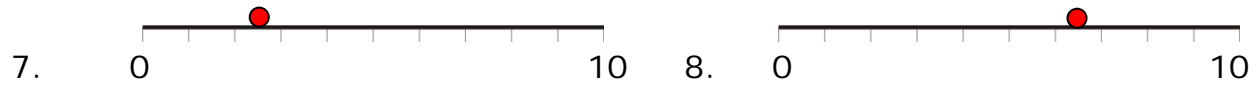
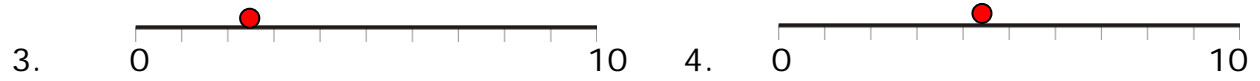


Name _____

Date _____

Topic: Estimate on a Number Line - Worksheet 2

Directions: Write what number is half-way between the two numbers.



Name _____

Date _____

Topic: Estimate on a Number Line - Worksheet 2 **ANSWERS**

Directions: Write what number is half-way between the two numbers.

1. **7**

2. **12**

3. **3**

4. **5**

5. **7**

6. **4**

7. **3**

8. **7**

9. **14**

10. **8**

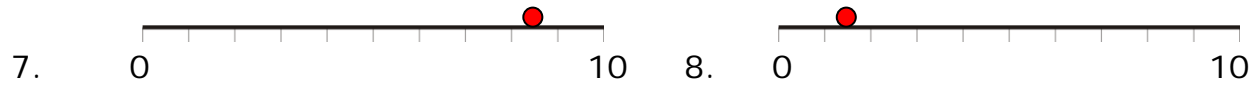
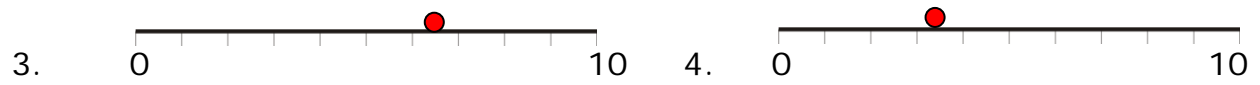


Name _____

Date _____

Topic: Estimate on a Number Line - Worksheet 3

Directions: Write what number is half-way between the two numbers.



Name _____

Date _____

Topic: Estimate on a Number Line - Worksheet 3 **ANSWERS**

Directions: Write what number is half-way between the two numbers.

1. **17**

2. **6**

3. **7**

4. **4**

5. **14**

6. **15**

7. **9**

8. **2**

9. **4**

10. **17**

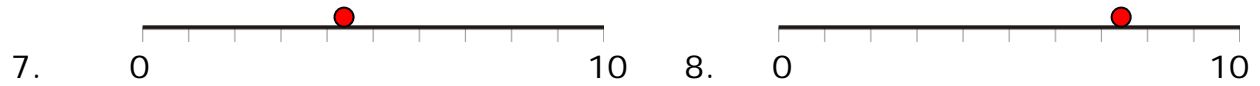
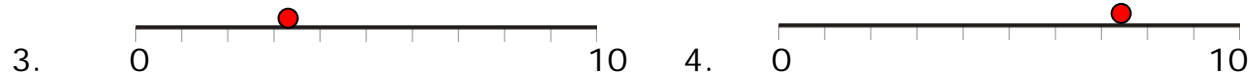


Name _____

Date _____

Topic: Estimate on a Number Line - Worksheet 4

Directions: Write what number is half-way between the two numbers.



Name _____

Date _____

Topic: Estimate on a Number Line - Worksheet 4 **ANSWERS**

Directions: Write what number is half-way between the two numbers.

1. **2**

2. **14**

3. **4**

4. **8**

5. **7**

6. **18**

7. **5**

8. **8**

9. **15**

10. **7**

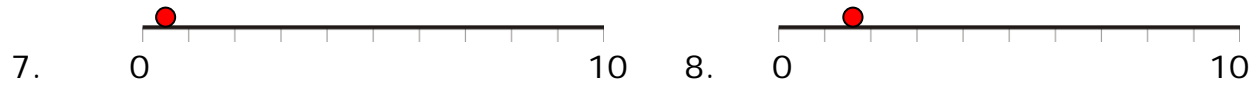
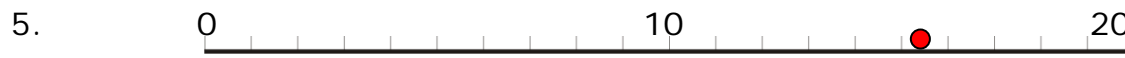


Name _____

Date _____

Topic: Estimate on a Number Line - Worksheet 5

Directions: Write what number is half-way between the two numbers.



Name _____

Date _____

Topic: Estimate on a Number Line - Worksheet 5 **ANSWERS**

Directions: Write what number is half-way between the two numbers.

1. **13**

2. **6**

3. **8**

4. **3**

5. **16**

6. **19**

7. **1**

8. **2**

9. **11**

10. **12**

