

Name \_\_\_\_\_

Date \_\_\_\_\_

## Estimating Weight- Independent Practice Worksheet

Complete all the problems.

1. Estimate the weight of a tiger. Circle the estimated weight.



200 kg    20 ounces    500 grams    5 tons

2. Estimate the weight of a feather. Circle the estimated weight.




1 kg.    1 gram    1 ton    1 ounce

3. Estimate the weight of a muffin. Circle the estimated weight.



20 ounce    5 grams    5 kg    5 tons

4. Estimate the weight of a train engine. Circle the estimated weight.



50 tons    50 grams    50 kg    50 ounces



Name \_\_\_\_\_

Date \_\_\_\_\_

5. Estimate the weight of an ear of corn. Circle the estimated weight



2 tons

2 kg

2 grams

2 ounces

6. Estimate the weight of a spinach plant. Circle the estimated weight




6 ounces

3 kg.

20 grams

1 ton

7. Estimate the weight of toothpaste. Circle the estimated weight




16 ounces

5 kg.

1 ton

4 grams

8. Estimate the weight of a bus. Circle the estimated weight



10 tons

10 kg.

10 grams

10 ounces



Name \_\_\_\_\_

Date \_\_\_\_\_

9. Estimate the weight of a bundle of newspapers. Circle the estimated weight




5 kg

2 tons

10 ounces

15 grams

10. Estimate the weight of chilies. Circle the estimated weight



10 grams

5 kg.

2 tons

7 ounces

