


Division as Sharing - Matching Worksheet


Write the letter of the answer that matches the number of items that should be shared with each item in order.

1. Share the apples so that each tree has two more than the last one. a.



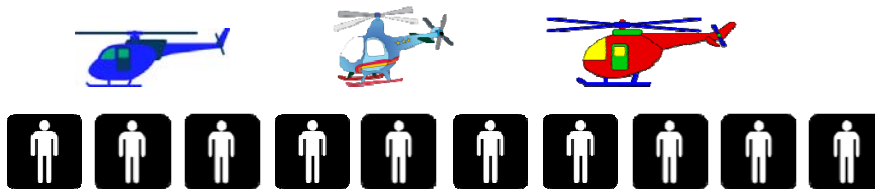
1, 3, 6

2. Share the coins so that each bank has two more than the last one. b.




3, 6, 9

3. Share the men so that each chopper has three more than the last one. c.



2, 4, 6

4. Share the caps so that each person has three more than the last one. d.



4, 8, 12

5. Share the boys so that each helmet has four more than the last one. e.



4, 6, 8

