


Name \_\_\_\_\_

Date \_\_\_\_\_

### What's the Decimal Value Worksheet?


Write the number the picture shows as a) a fraction and b) a decimal.

1



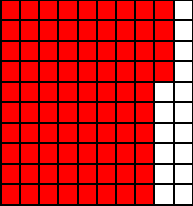
a) \_\_\_\_\_  
b) \_\_\_\_\_

2




a) \_\_\_\_\_  
b) \_\_\_\_\_

3




a) \_\_\_\_\_  
b) \_\_\_\_\_

4




a) \_\_\_\_\_  
b) \_\_\_\_\_

5




a) \_\_\_\_\_  
b) \_\_\_\_\_

6



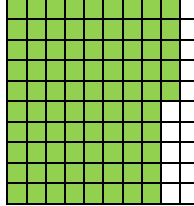
a) \_\_\_\_\_  
b) \_\_\_\_\_

7



a) \_\_\_\_\_  
b) \_\_\_\_\_

8



a) \_\_\_\_\_  
b) \_\_\_\_\_

