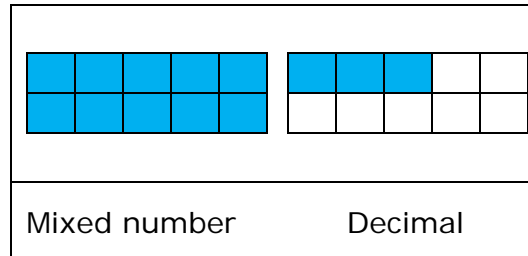


Name _____


Date _____

Decimals to Fractions Lesson and Practice

Write the decimal and the fraction that the picture illustrates.




First, count the wholes.



There is 1 whole.

Now find the fraction part.

There are 10 equal parts. There are 3 colored parts. So, the mixed number is $1\frac{3}{10}$

In the above problem, the decimal form for the picture is: 1.3

Answer: Mixed number = $1\frac{3}{10}$, decimal = 1.3**Practice Problems**