

Name _____

Date _____

Skip Counting By 5s - Independent Practice Worksheet

Complete the following problems. Make sure to draw the pictures to help you solve the problems.

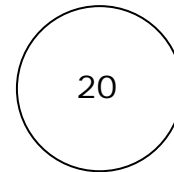
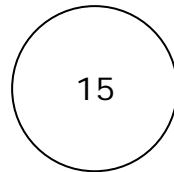


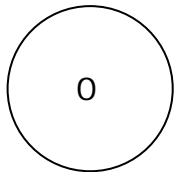
1. Find the total number of balloons counting by 5s.



5



2. The series below counts by 5s. Complete the empty boxes.



3. Complete the sequence below.

| | | | | | |
|---|--|----|--|--|----|
| 5 | | 15 | | | 30 |
|---|--|----|--|--|----|

4. Find the total number of trees in the forest counting by 5s.



5



15



Name _____

Date _____


5. The series below counts by 5s. Complete the empty boxes.

| | | | | |
|----|--|--|--|----|
| 10 | | | | 30 |
|----|--|--|--|----|

6. Complete the sequence below.

| | | | | | |
|--|--|--|--|----|----|
| | | | | 30 | 35 |
|--|--|--|--|----|----|

7. Find the total number of people counting by 5s.



8. The series below counts by 5s. Complete the empty boxes.

| | | | | |
|----|--|----|--|--|
| 15 | | 25 | | |
|----|--|----|--|--|

9. Complete the sequence below.

| | | | | | |
|----|--|--|--|----|--|
| 20 | | | | 40 | |
|----|--|--|--|----|--|

10. Find the total number of paint palette s counting by 5s.

