

Name \_\_\_\_\_

Date \_\_\_\_\_

### Skip Counting By 3s - Independent Practice Worksheet

Complete all of the problems. Be sure to draw pictures to help you solve the problems.

1. Find the total number of cups counting by 3s.



3



\_\_\_\_\_



\_\_\_\_\_

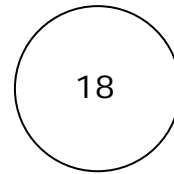
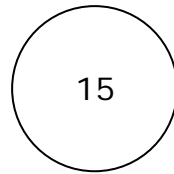





\_\_\_\_\_



\_\_\_\_\_

2. The series below counts by 3s. Complete the empty boxes.



3. Complete the sequence below.

6		12			21
---	--	----	--	--	----

4. Find the total number of candles on the cake counting by 3s.



3



\_\_\_\_\_



\_\_\_\_\_



\_\_\_\_\_



15



Name \_\_\_\_\_

Date \_\_\_\_\_

5. The series below counts by 3s. Complete the empty boxes.

12				24
----	--	--	--	----

6. Complete the sequence below.

				15	18
--	--	--	--	----	----

7. Find the total number of guitars counting by 3s.



  3        \_\_\_\_\_      \_\_\_\_\_      \_\_\_\_\_      \_\_\_\_\_

8. The series below counts by 3s. Complete the empty boxes.

0		6		
---	--	---	--	--

9. Complete the sequence below.

0				12	
---	--	--	--	----	--

10. Find the total number of toy flutes counting by 3s.



  3        \_\_\_\_\_      \_\_\_\_\_      \_\_\_\_\_      \_\_\_\_\_

