

Name _____

Date _____

Skip Counting By 3s - Guided Lesson:

Complete the following problems:

1) Find the total number of computer mice counting by 3s.



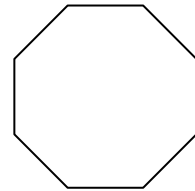
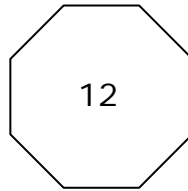
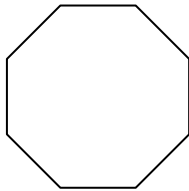
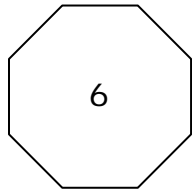
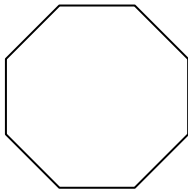
3



6



2) The series below counts by 3s. Complete the empty boxes.



3) Complete the sequence below.

6		12			21
---	--	----	--	--	----

