



Name _____

Date _____

Skip Counting By 2s - Matching Worksheet

Match the problems to the numbers that they are missing or represent.
Write the letter of the answer that matches the problem.

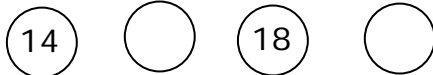
1. _____  a 16 ,20


2. _____  b 8,12,14

3. _____

8		12			18
---	--	----	--	--	----

 c 2,4,6,8


4. _____  d 8 ,12

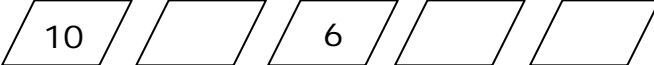
5. _____  e 8,4,2

6. _____

				10	12
--	--	--	--	----	----

 f. 16,18 ,22

7. _____  g 8,10,12,14

8. _____  h 2,4,6,8,10

9. _____

6					16
---	--	--	--	--	----

 i 10, 14,16

