

Name _____

Date _____

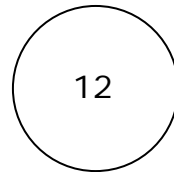
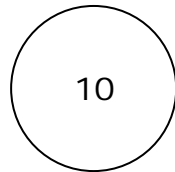


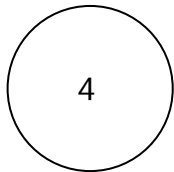
Skip Counting By 2s - Independent Practice Worksheet

Complete all the problems.

1. Find the total number of coats counting by 2s.



2. The series below counts by 2s. Complete the empty boxes.




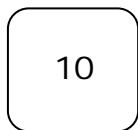

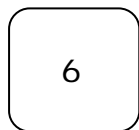

3. Complete the sequence below.

4		8			14
---	--	---	--	--	----

4. Find the total number of gloves counting by 2s.



5. The series below counts by 2s. Complete the empty boxes.



Name _____

Date _____

6. Complete the sequence below.

				10	12
--	--	--	--	----	----

7. Find the total number of keys counting by 2s.



8. The series below counts by 2s. Complete the empty boxes.



9. Complete the sequence below.

0				8	
---	--	--	--	---	--

10. Find the total number of toys counting by 2s.

