



Name _____

Date _____

Picture Addition - Guided Lesson

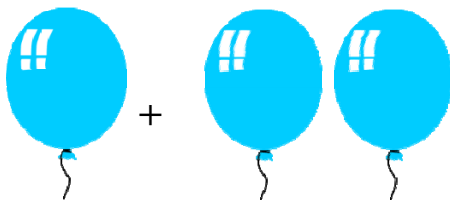
Complete the following problems:

1) Look at the number of fish in each group below and write the addition equation below it.



$$\underline{\hspace{2cm}} + \underline{\hspace{2cm}} = \underline{\hspace{2cm}}$$

2) Look at the each of the groups below and write the correct number of the balloons on the given lines. Then add the two values together and write the sum.



$$\underline{\hspace{2cm}} + \underline{\hspace{2cm}} = \underline{\hspace{2cm}}$$

3) Look at the number of toffees in each group below and write the addition equation below it.



$$\underline{\hspace{2cm}} + \underline{\hspace{2cm}} = \underline{\hspace{2cm}}$$

