




Name _____

Date _____


Adding Groups Practice Worksheet



Color the objects below with the specified colors. Write the numbers to complete the sentence.



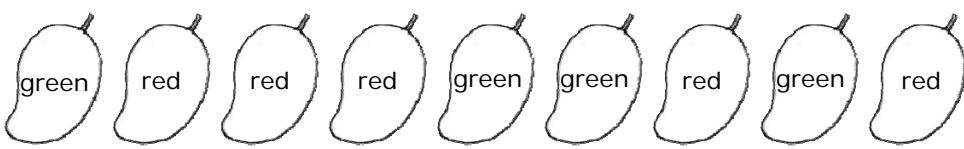


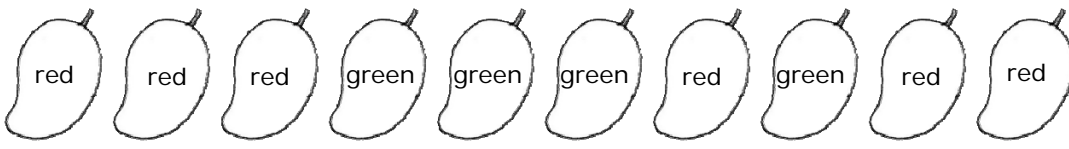


 _____  + _____  = _____ Rabbits

First of all color the rabbits with specified colors. Write the no. of pink rabbits and blue rabbits in the space provided and then write the total no. of rabbits on the space provided on the right hand side. In the above question no. of pink rabbits=5 and number of blue rabbits=3. Therefore total will be 5+3=8.



 _____  + _____  = _____ Rabbits

Practice Problems

1	 _____  + _____  = _____ Mangoes
2	 _____  + _____  = _____ Mangoes

