

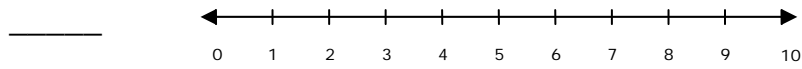
Name _____

Date _____

Number Line Addition - Matching Worksheet

Match the problems to their answers. Write the letter of the answer that matches the problem. Solve addition problem by adding two numbers on number line.

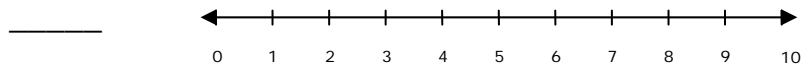
1.



$$\begin{array}{r} 5 \\ + 3 \\ \hline \end{array} = \underline{\quad}$$

a. 7

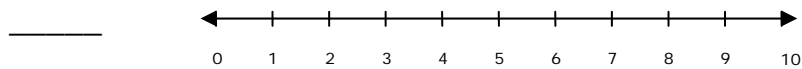
2.



$$\begin{array}{r} 2 \\ + 7 \\ \hline \end{array} = \underline{\quad}$$

b. 10

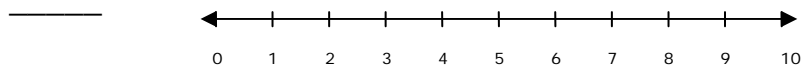
3.



$$\begin{array}{r} 4 \\ + 3 \\ \hline \end{array} = \underline{\quad}$$

c. 5

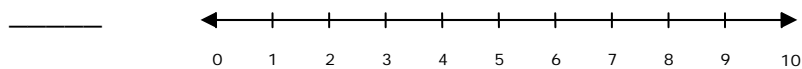
4.



$$\begin{array}{r} 5 \\ + 5 \\ \hline \end{array} = \underline{\quad}$$

d. 9

5.



$$\begin{array}{r} 3 \\ + 2 \\ \hline \end{array} = \underline{\quad}$$

e. 8

