

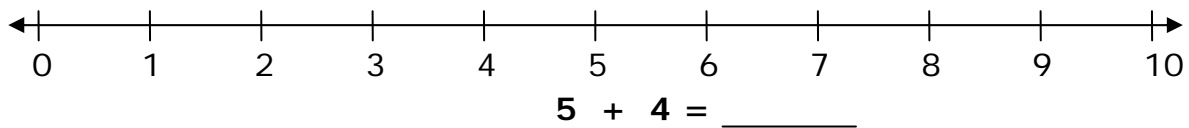
Name \_\_\_\_\_

Date \_\_\_\_\_

## Number Line Addition - Step-by-Step Lesson

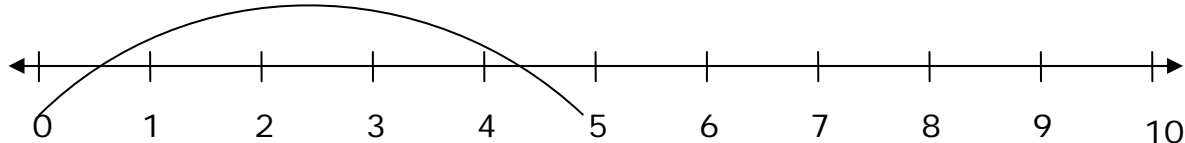
### Lesson 1 Number Line Addition Problems:

Draw two arrows on the number line to indicate the addition problem.

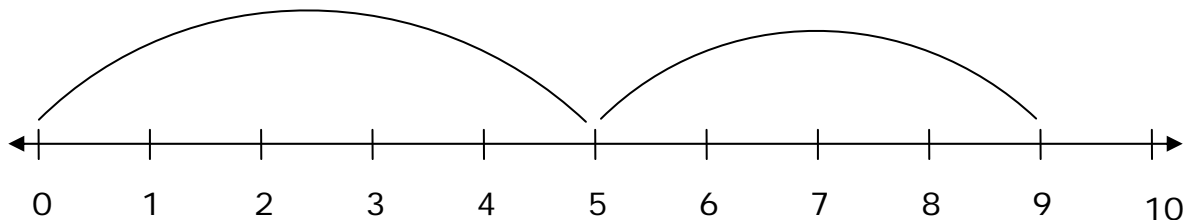


#### Explanation:

Count from 0 to 5. So the arrow is on number 5.



Count from 5 to 9. We counted 4 numbers till 9



The answer is 9.

