

Name \_\_\_\_\_

Date \_\_\_\_\_

## Number Line Addition - Independent Practice Worksheet

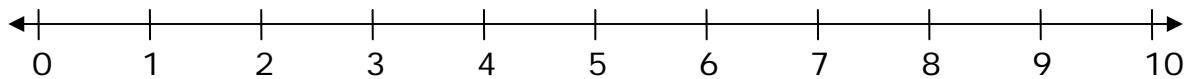
Solve the addition problems by adding two numbers on the number lines.

1.



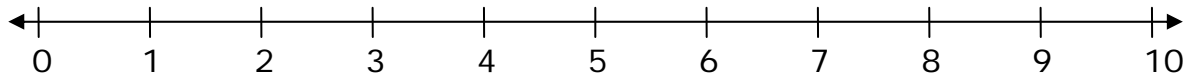
$$4 + 4 = \underline{\hspace{2cm}}$$

2.



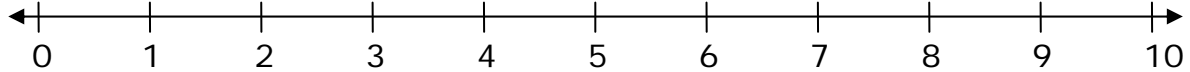
$$2 + 3 + 5 = \underline{\hspace{2cm}}$$

3.



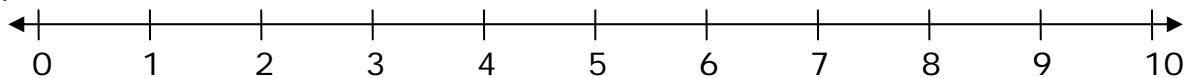
$$6 + 4 = \underline{\hspace{2cm}}$$

4.



$$3 + 6 = \underline{\hspace{2cm}}$$

5.



$$5 + 2 + 2 = \underline{\hspace{2cm}}$$

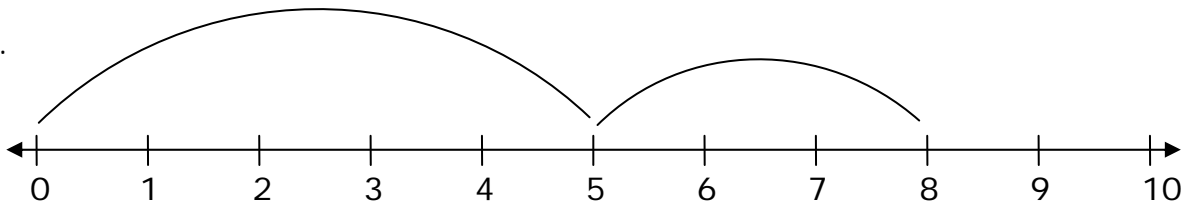


Name \_\_\_\_\_

Date \_\_\_\_\_

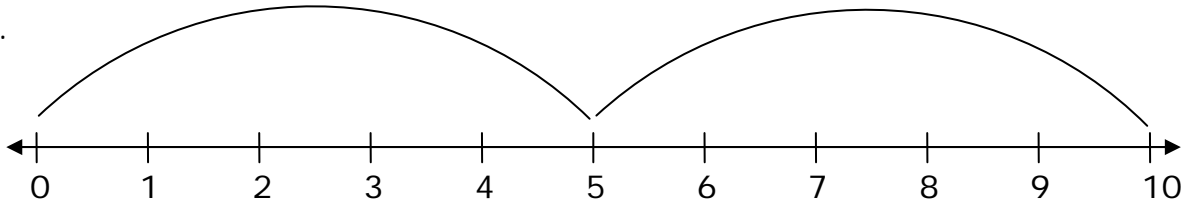
Solve the questions below by writing in the sum that the number line shows?

6.



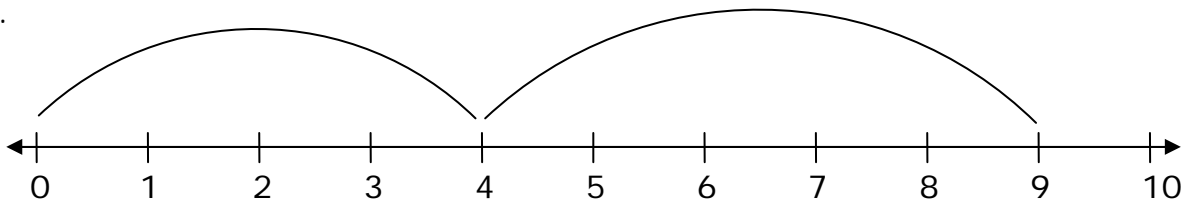
$$\underline{\quad} + \underline{\quad} = \underline{\quad}$$

7.



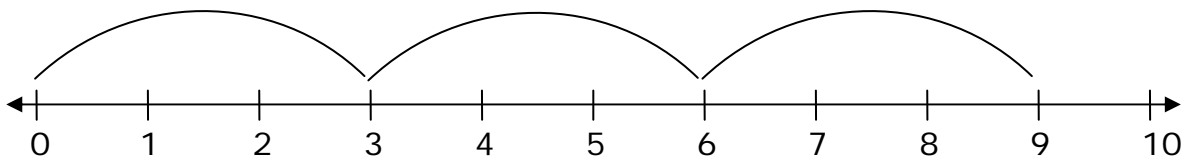
$$\underline{\quad} + \underline{\quad} = \underline{\quad}$$

8.



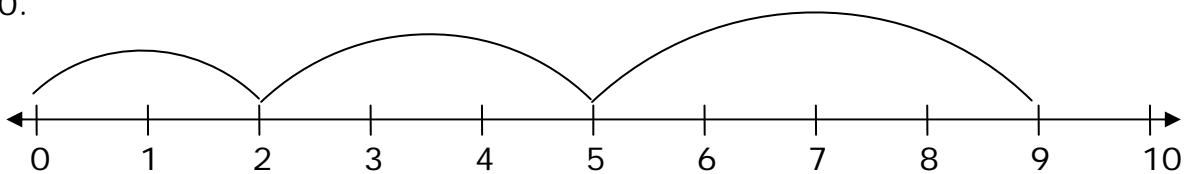
$$\underline{\quad} + \underline{\quad} = \underline{\quad}$$

9.



$$\underline{\quad} + \underline{\quad} + \underline{\quad} = \underline{\quad}$$

10.



$$\underline{\quad} + \underline{\quad} + \underline{\quad} = \underline{\quad}$$

