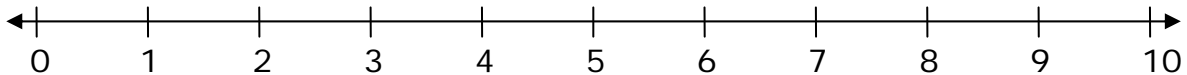


Name _____

Date _____

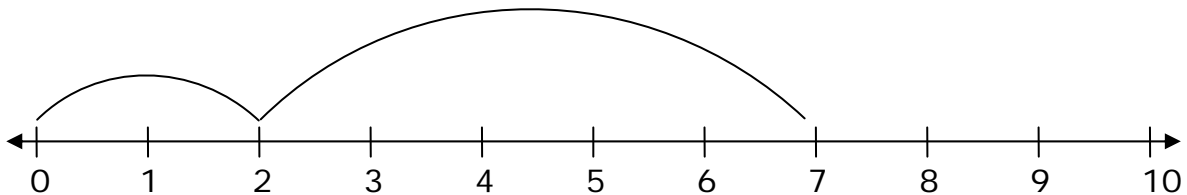
Number Line Addition - Guided Lesson

1) Draw two arrows on the numbers line to indicate the addition problem.



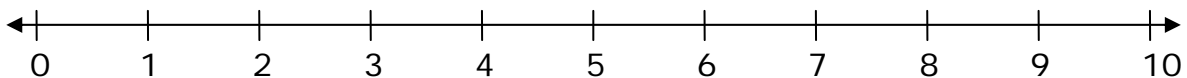
$$3 + 5 = \underline{\hspace{2cm}}$$

2) What sum does the number line show?



$$\underline{\hspace{1cm}} + \underline{\hspace{1cm}} = \underline{\hspace{2cm}}$$

3) Draw two arrows on the number line to indicate the addition problem.



$$7 + 2 = \underline{\hspace{2cm}}$$

