


Name: _____

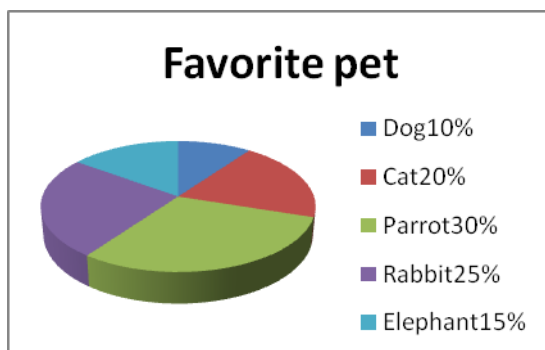
Date _____

Topic : Reading and making pie graphs- Worksheet 1

Use the graph to answer :



1. About what percent of subjects represents Physics?
A. 14% B. 24% C. 20% D. 25%
2. How many people chose Math?
A. 10% B. 22% C. 25% D. 19%
3. About what percent of subjects represents History?
A. 9% B. 15% C. 28% D. 35%
4. How many people choose English as their favorite subjects?
A. 20% B. 12% C. 35% D. 15%
5. How many people chose Chemistry?
A. 20% B. 28% C. 34% D. 21%



6. About what percent of pets represents Dog?
A. 10% B. 22% C. 15% D. 30%
7. How many people chose Rabbit?
A. 15% B. 25% C. 9% D. 36%
8. How many people chose Elephant?
A. 25% B. 10% C. 12% D. 15%



Name: _____

Date _____

Topic : Reading and making pie graphs- Worksheet 1 **ANSWERS**

Use the graph to answer :

1. **C. 20%**

2. **A. 10%**

3. **B. 15%**

4. **D. 15%**

5. **A. 20%**

6. **A. 10%**

7. **B. 25%**

8. **D. 15%**

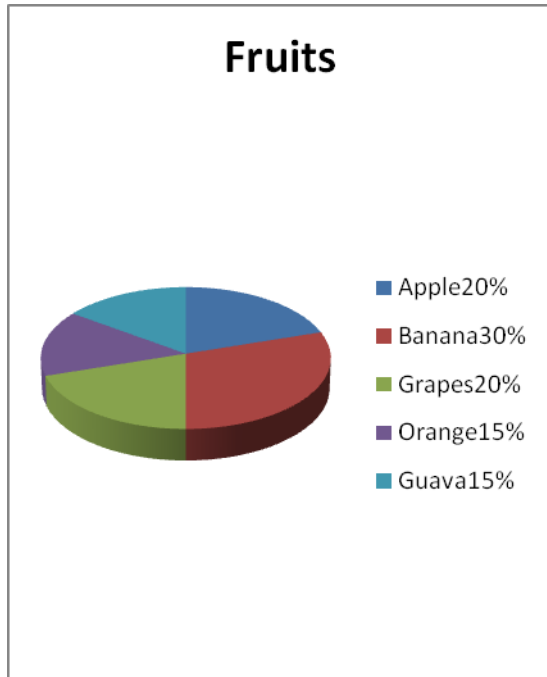


Name: _____

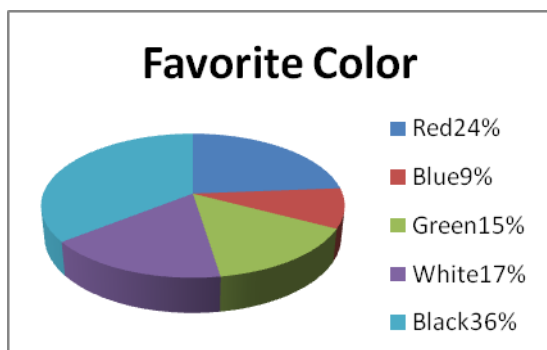
Date _____

Topic : Reading and making pie graphs- Worksheet 2

Use the graph to answer :



1. About what percent of fruits represents Orange?
A. 15% B. 36% C. 20% D. 25%
2. How many people chose Guava?
B. 25% B. 20% C. 15% D. 18%
3. About what percent of the fruit represented is Bananas?
B. 15% B.25% C. 30% D. 35%
4. How many people choose Apple as their favorite fruits?
B. 20% B. 30% C. 32% D. 15%
5. How many people chose Grapes?
B. 21% B. 25% C. 36% D. 20%



6. About what percent of colors represents Red?
B. 10% B. 24% C. 15% D. 35%
7. How many people chose Black?
B. 20% B. 24% C.9% D.36%
8. How many people chose Blue?
B. 26% B.9% C. 12% D. 15%



Name: _____

Date _____

Topic : Reading and making pie graphs- Worksheet 2 **ANSWERS**

Use the graph to answer :

1. **A. 15%**

2. **C. 15%**

3. **C. 30%**

4. **A. 20%**

5. **D. 20%**

6. **B. 24%**

7. **D. 36%**

8. **B. 9%**

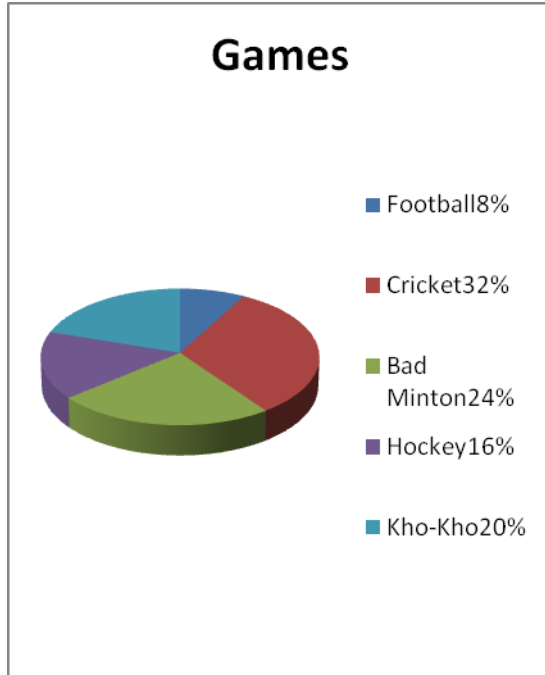


Name: _____

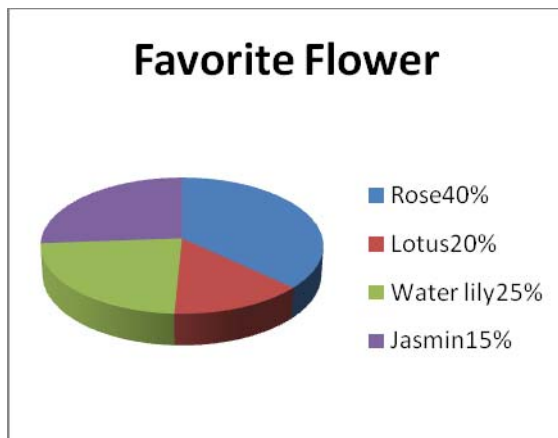
Date _____

Topic : Reading and making pie graphs- Worksheet 3

Use the graph to answer :



1. About what percent of games represents Football?
A. 8% B. 32% C. 22% D. 15%
2. How many people chose Cricket?
C. 24% B. 32% C. 12% D. 18%
3. About what percent of games represents Kho-Kho?
C. 10% B.15% C. 28% D. 20%
4. How many people choose Hockey as their favorite games?
C. 16% B. 30% C. 32% D. 15%
5. How many people chose Bad Minton?
C. 21% B. 18% C. 24% D. 20%



6. About what percent of flower represents Lotus?
C. 10% B. 24% C. 15% D. 20%
7. How many people chose Water lily?
C. 25% B. 24% C.9% D.36%
8. How many people chose Rose?
C. 26% B.9% C.40% D. 15%



Name: _____

Date _____

Topic : Reading and making pie graphs- Worksheet 3 **ANSWERS**

Use the graph to answer :

1. **A. 8%**
2. **B. 32%**
3. **D. 20%**
4. **A. 16%**
5. **C. 24%**
6. **D. 20%**
7. **A. 25%**
8. **C. 40%**

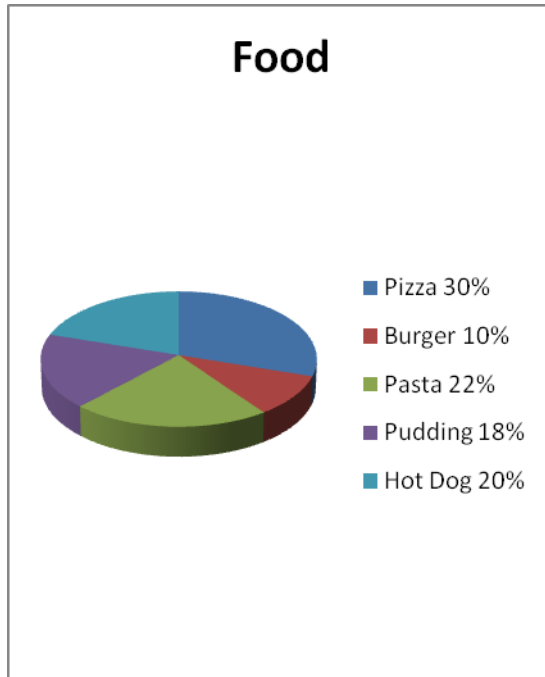


Name: _____

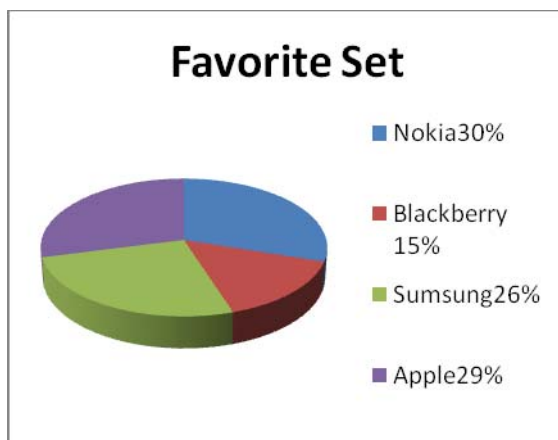
Date _____

Topic : Reading and making pie graphs- Worksheet 4

Use the graph to answer :



1. About what percent of food represents Pizza?
A. 10% B. 30% C. 22% D. 16%
2. How many people chose Pudding?
D. 18% B. 28% C. 12% D. 30%
3. About what percent of food represents Pasta?
D. 20% B.22% C. 28% D. 20%
4. How many people choose Burger as their favorite food?
D. 15% B. 10% C. 32% D. 15%
5. How many people chose Hot Dog?
D. 20% B. 19% C. 24% D. 32%



6. About what percent of set represents Nokia?
D. 15% B. 24% C. 30% D. 20%
7. How many people chose Apple?
D. 29% B. 20% C.10% D.36%
8. How many people chose Samsung?
D. 21% B.9% C.40% D.26%



Name: _____

Date _____

Topic : Reading and making pie graphs- Worksheet 4 **ANSWERS**

Use the graph to answer :

1. **B. 30%**

2. **A. 18%**

3. **B. 22%**

4. **B. 10%**

5. **A. 20%**

6. **C. 30%**

7. **A. 29%**

8. **D. 26%**

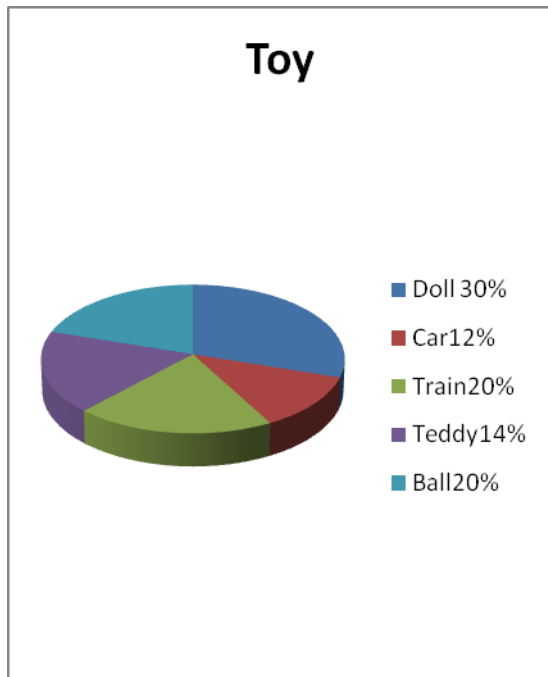


Name: _____

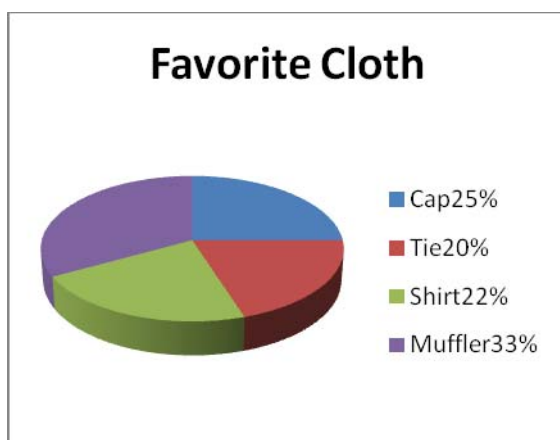
Date _____

Topic : Reading and making pie graphs- Worksheet 5

Use the graph to answer :



1. About what percent of toy represents Train?
A. 10% B. 29% C. 20% D. 15%
2. How many people chose Doll?
E. 19% B. 27% C. 11% D. 30%
3. About what percent of toy represents Teddy?
E. 14% B. 21% C. 30% D. 20%
4. How many people choose Car as their favorite toy?
E. 16% B. 12% C. 31% D. 15%
5. How many people chose Ball?
E. 20% B. 18% C. 26% D. 32%



6. About what percent of cloth represents Shirt?
E. 22% B. 25% C. 32% D. 20%
7. How many people chose Tie?
E. 28% B. 20% C. 15% D. 36%
8. How many people chose Cap?
E. 22% B. 10% C. 40% D. 25%



Name: _____

Date _____

Topic : Reading and making pie graphs- Worksheet 5 **ANSWERS**

Use the graph to answer :

1. **C. 20%**

2. **D. 30%**

3. **A. 14%**

4. **B. 12%**

5. **A. 20%**

6. **A. 22%**

7. **B. 20%**

8. **D. 25%**

