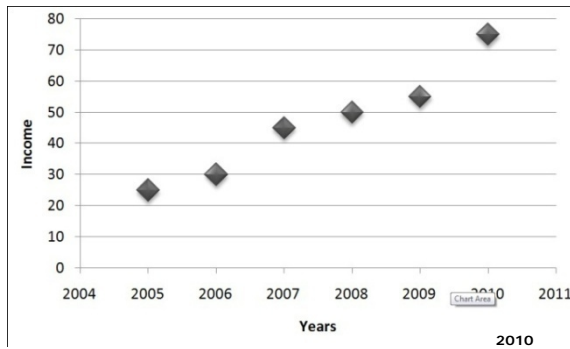


**Analyzing Plotted Functions - Matching Worksheet**

Write the letter of the answer that matches the problem.

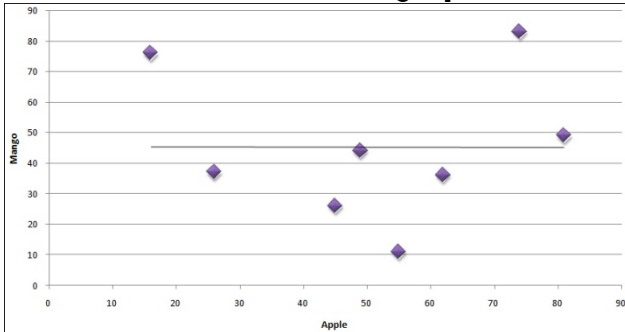
1. A wholesale dealer of medicine plots the scatter diagram of his income through the years 2005 to 2010. In which year was his income the highest?

- 2010 \_\_\_\_\_
- 2009 \_\_\_\_\_
- 2008 \_\_\_\_\_
- 2007 \_\_\_\_\_



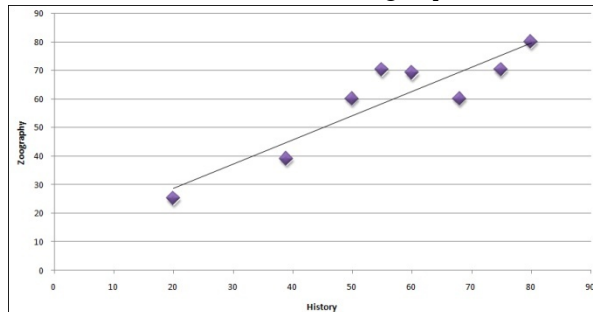
a. No trend

2. Describe the trend of the graph.



b. Positive trend

3. Describe the trend of the graph.



c. 2010

