

Name \_\_\_\_\_

Date \_\_\_\_\_

### Which is Smaller - Independent Practice Worksheet

Underline the image on the right that is smaller than the image in the left-hand column.

1.



2.



3.



4.






5.



6.



7.



8.



9.



10.

