


Name _____

Date _____


Working with Tallies - Matching Worksheet


Match the correct number of objects with their corresponding tally marks, given on the right.

1. _____


a. 

2. _____



b. 

3. _____


c. 

4. _____


d. 

5. _____


e. 

6. _____



f. 

7. _____


g. 

8. _____


h.

9. _____


i. 

