


Name \_\_\_\_\_

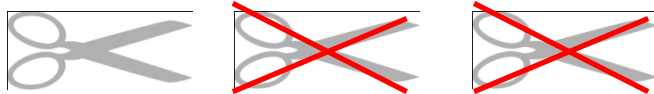
Date \_\_\_\_\_

### Learning to Subtract - Independent Practice Worksheet


Count the total number of objects in each problem. Subtract the objects that have been crossed out. In the box provided, write the number of objects left.



2.




3.



4.




5.



6.



7.



8.



9.



10.

