


Name \_\_\_\_\_

Date \_\_\_\_\_

### More or Less - Guided Lesson Explanation



#### Explanation#1

The first group has 7 balloons. The second group has 6 balloons. The second group has fewer balloons than the first group. Circle the second group because it has fewer balloons.



#### Explanation#2

The first group has 1 fish. The second group has 3 fish. The first group has less fish than the second group. Circle the first group because it has fewer fish.



Name \_\_\_\_\_

Date \_\_\_\_\_

### Explanation#3

The first group has 12 snowmen. The second group has 3 snowmen. The first group has more snowmen than the second group. Circle the second group since it has fewer snowmen.

