

Name _____

Date _____

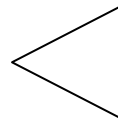
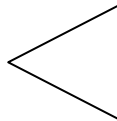
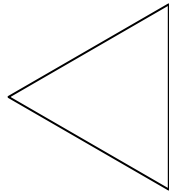
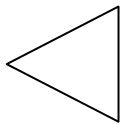
Long and Short - Guided Lesson

Complete the following problems:

1) Which of the following objects is the longest? Color in the longest object.



2) Which of the following objects is the longest? Color in the longest object.



3) Which of the following is the shortest? Circle it.

