


Name _____

Date _____


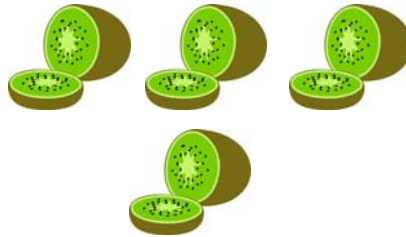

Finding Less In Sets: Guided Lesson

Complete the following problems:

1) Look at the groups below. Circle the group that has the least amount of objects.



2) Make a box around the group that has the least amount of objects.



3) Circle the group that has the least number of objects.

