




How Tall Is It - Independent Practice Worksheet


Complete all the problems.


How many arrows tall is each object?

1.  arrows tall

2.  arrows tall

3.  arrows tall

4.  arrows tall

5.  arrows tall

6.  arrows tall

7.  arrows tall



Name _____

Date _____

8.



arrows tall

9.



arrows tall

10.



arrows tall

