



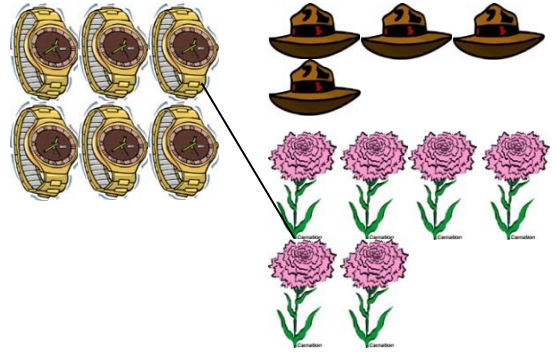
1 to Many - Matching Worksheet

Match the problems with their answers. In the blanks provides, write the letter that represents the answer to each problem.


_____ 1. Count the number of objects in each group. Match the group on the left side with the group on the right side that has the same number of objects.




a.



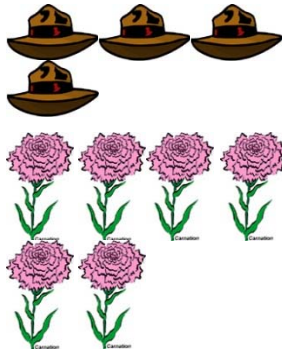
_____ 2. Count the number of objects in each group. Match the group on the left side with the group on the right side that has the same number of objects.



b.



_____ 3. Count the number of objects in each group. Match the group on the left side with the group on the right side that has the same number of objects.



c.

