


Name _____


Date _____

Counting 1 to 5 Objects - Independent Practice Worksheet


1) Count the objects in each group. Draw a box around the group that has only 2 objects.



2) Count the objects in each group. Draw a box around the group that has only 4 objects.



3) Count the objects in each group. Draw a box around the group that has only 5 objects.




4) Circle the group that has the same number of objects as the number inside the box on the left.

2






5) Count the objects in each group. Draw a box around the group that has only 3 objects.




Name _____

Date _____


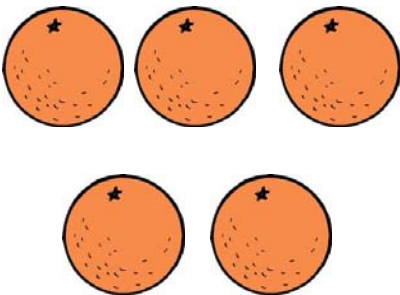
6) Circle the group that has the same number of objects as the number inside the box on the left.



7) Count the objects in each group. Draw a box around the group that has only 2 objects.




8) Count the objects in each group. Draw a box around the group that has only 5 objects.



Name _____

Date _____

9) Count the objects in each group. Draw a box around the group that has only 1 object



10) Circle the group that has the same number of objects as the number inside the box on the left.

