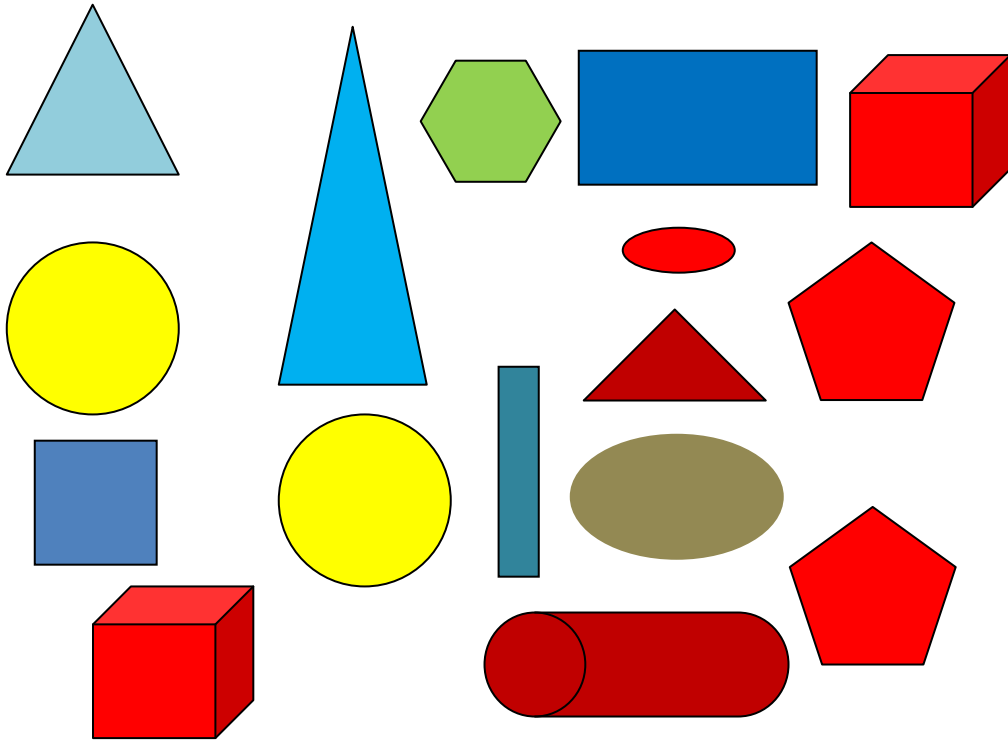


Name: \_\_\_\_\_

Date \_\_\_\_\_

Topic: Learning Shapes - Worksheet 1



Write the number of shapes found above

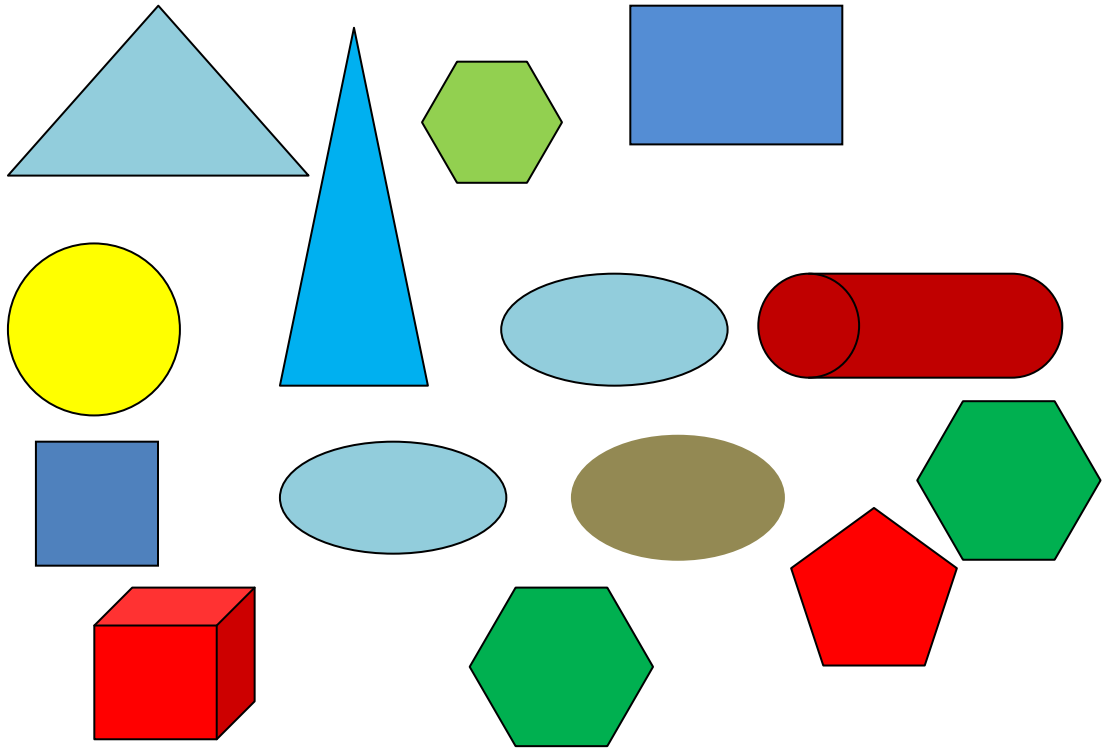
	SHAPE	HOW MANY?
1.	Squares	
2.	Rectangles	
3.	Circles	
4.	Ovals	
5.	Pentagons	
6.	Hexagons	
7.	Triangles	
8.	Cube	
9.	Cylinders	
10.	Pyramids	



Name: \_\_\_\_\_

Date \_\_\_\_\_

Topic: Learning Shapes - Worksheet 2



**Write the number of shapes found above**

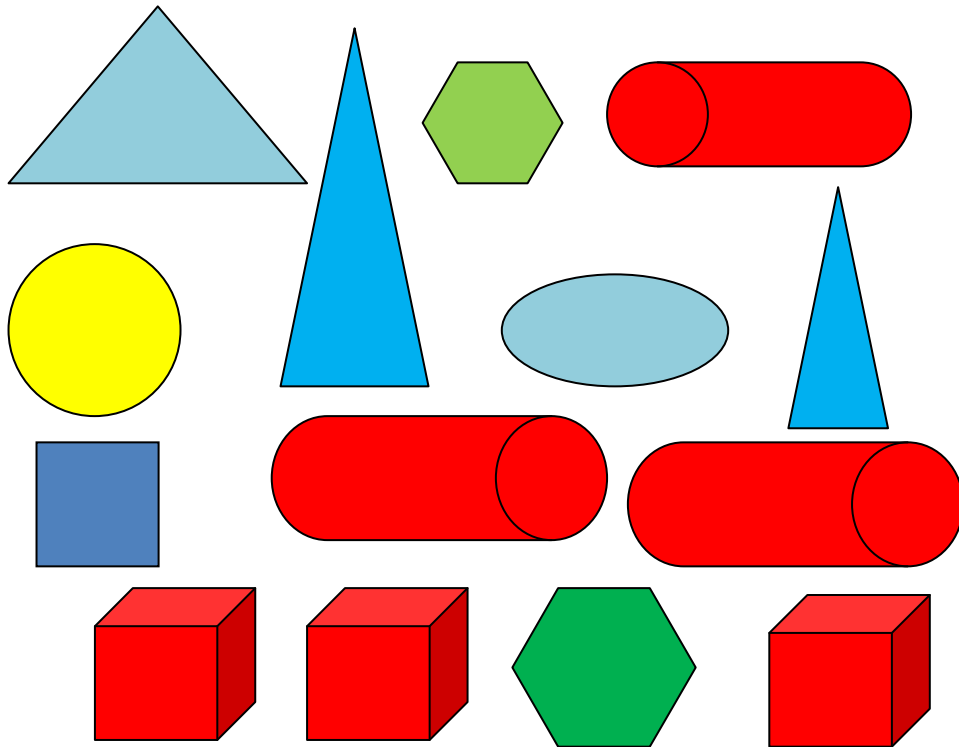
	SHAPE	HOW MANY?
1.	Squares	
2.	Rectangles	
3.	Circles	
4.	Ovals	
5.	Pentagons	
6.	Hexagons	
7.	Triangles	
8.	Cube	
9.	Cylinders	
10.	Pyramids	



Name: \_\_\_\_\_

Date \_\_\_\_\_

Topic: Learning Shapes - Worksheet 3



Write the number of shapes found above

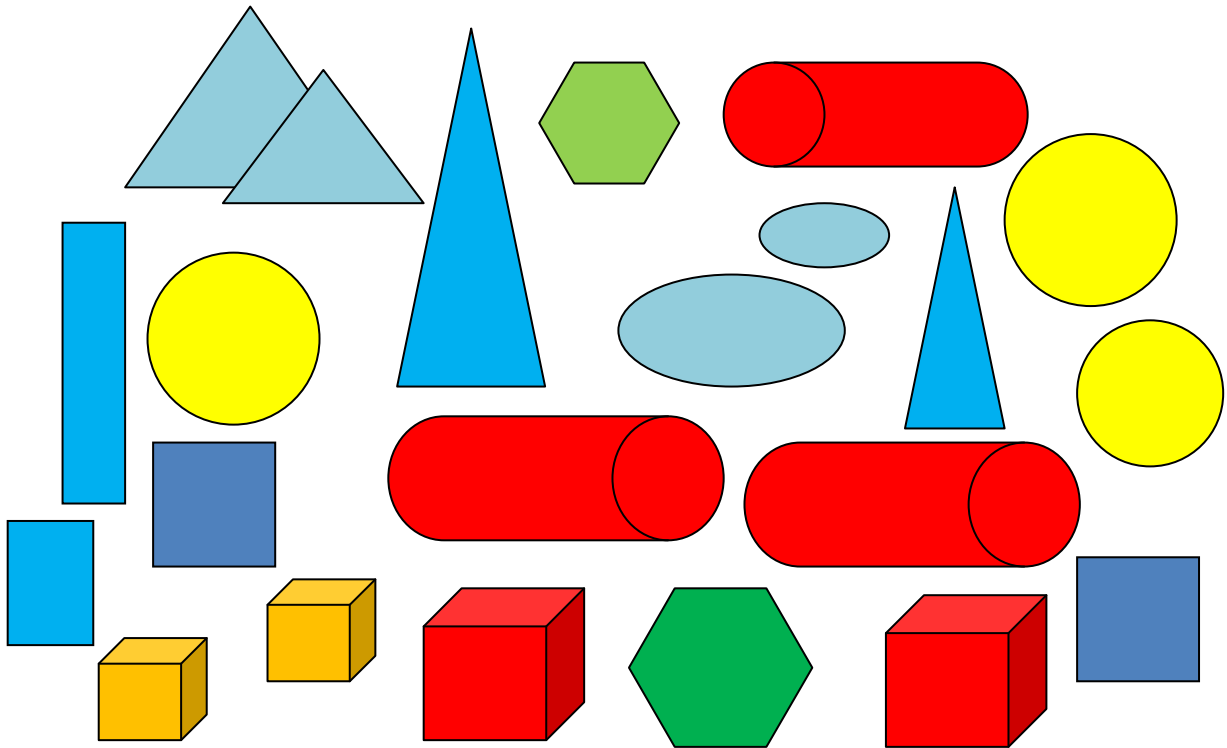
	SHAPE	HOW MANY?
1.	Squares	
2.	Rectangles	
3.	Circles	
4.	Ovals	
5.	Pentagons	
6.	Hexagons	
7.	Triangles	
8.	Cube	
9.	Cylinders	
10.	Pyramids	



Name: \_\_\_\_\_

Date \_\_\_\_\_

Topic: Learning Shapes - Worksheet 4



**Write the number of shapes found above**

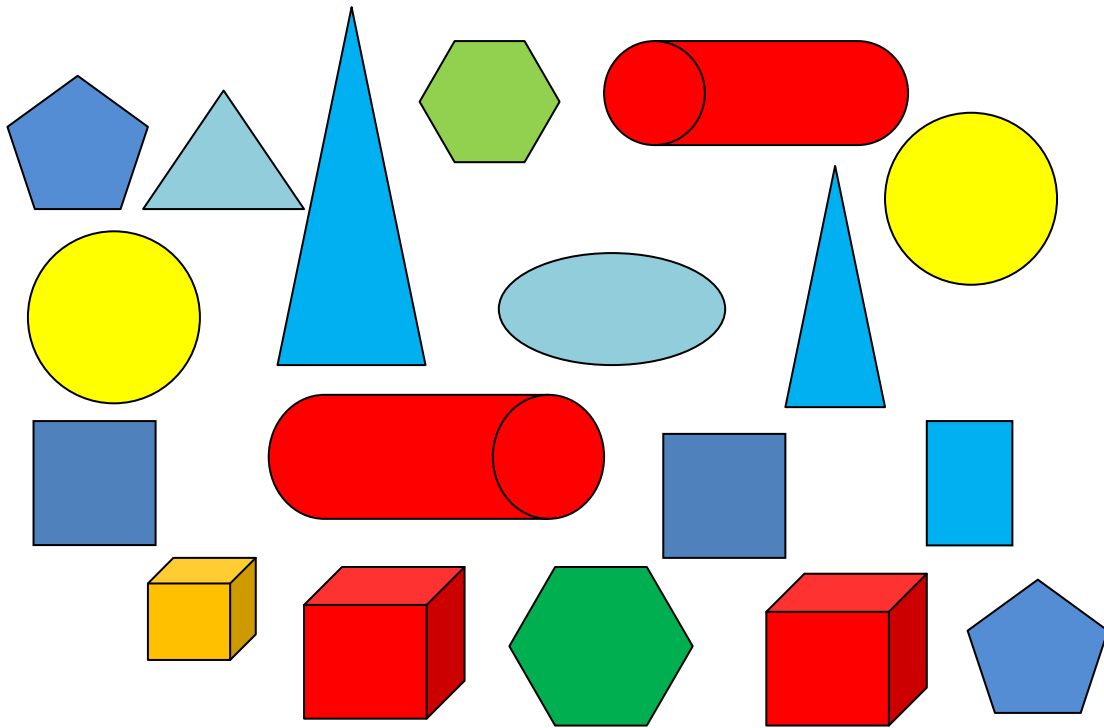
	SHAPE	HOW MANY?
1.	Squares	
2.	Rectangles	
3.	Circles	
4.	Ovals	
5.	Pentagons	
6.	Hexagons	
7.	Triangles	
8.	Cube	
9.	Cylinders	
10.	Pyramids	



Name: \_\_\_\_\_

Date \_\_\_\_\_

Topic: Learning Shapes - Worksheet 5



**Write the number of shapes found above**

	SHAPE	HOW MANY?
1.	Squares	
2.	Rectangles	
3.	Circles	
4.	Ovals	
5.	Pentagons	
6.	Hexagons	
7.	Triangles	
8.	Cube	
9.	Cylinders	
10.	Pyramids	

