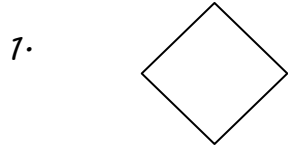


Name: _____

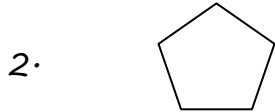
Date _____

Identify and Compare Three-dimensional Shapes - Worksheet 1

Match each shape to its name.



A. Triangle



B. Pentagon



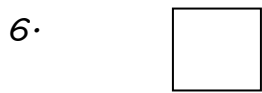
C. Trapezoid



D. Hexagon



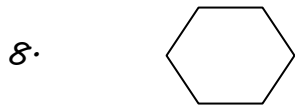
E. Circle



F. Oval



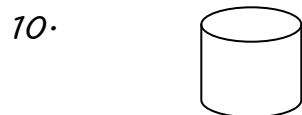
G. Rhombus



H. Cylinder



I. Square



J. Rectangle




Name: _____

Date _____

Identify and Compare Three-dimensional Shapes - Worksheet 2

Match each shape to its name.

1.



A. Triangle

2.



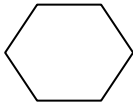
B. Pentagon

3.



C. Trapezoid

4.



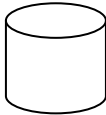
D. Hexagon

5.




E. Circle

6.



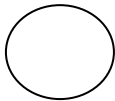
F. Oval

7.



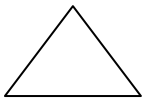
G. Rhombus

8.



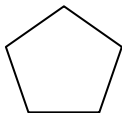
H. Cylinder

9.



I. Square

10.



J. Rectangle



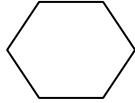
Name: _____

Date _____

Identify and Compare Three-dimensional Shapes - Worksheet 3

Match each shape to its name.

1.



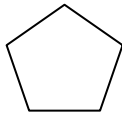
A. Triangle

2.



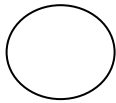
B. Pentagon

3.



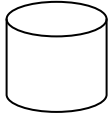
C. Trapezoid

4.




D. Hexagon

5.



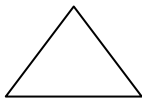
E. Circle

6.



F. Oval

7.



G. Rhombus

8.



H. Cylinder

9.



I. Square

10.



J. Rectangle



Name: _____

Date _____

Identify and Compare Three-dimensional Shapes - Worksheet 4

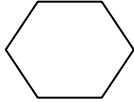
Match each shape to its name.

1.



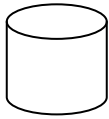
A. Triangle

2.



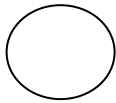
B. Pentagon

3.



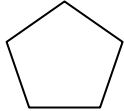
C. Trapezoid

4.




D. Hexagon

5.



E. Circle

6.



F. Oval

7.



G. Rhombus

8.



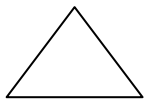
H. Cylinder

9.



I. Square

10.



J. Rectangle



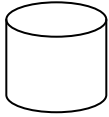
Name: _____

Date _____

Identify and Compare Three-dimensional Shapes - Worksheet 5

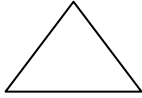
Match each shape to its name.

1.



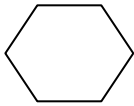
A. Triangle

2.



B. Pentagon

3.



C. Trapezoid

4.



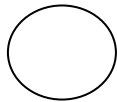
D. Hexagon

5.



E. Circle

6.



F. Oval

7.



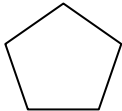
G. Rhombus

8.




H. Cylinder

9.



I. Square

10.



J. Rectangle

