

Name: _____

Date _____

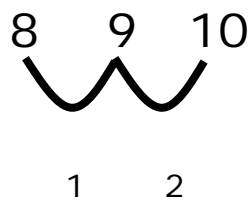
Making Ten Step-by-Step Lesson

1. What number do you need to add to 8 to make 10?

Answering #1: If you reword the questions as:

How far away from the number 10 is number 8.

This makes it much easier. If we start at 8 and count to 10, the number of spaces we move is the answer.

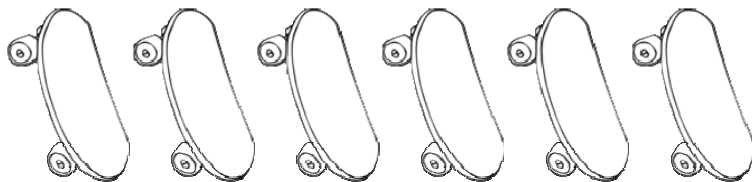


As we can see, 10 is 2 counts from 8.

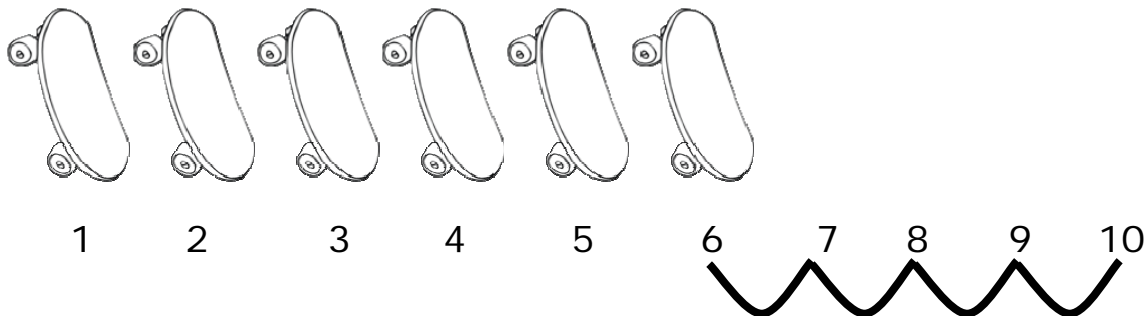
That means that $8 + 2 = 10$

We need a **2**.

2. How many more skateboards would you need to make 10?



Answering #2: The first thing that we need to do is find out the number of skateboards we have. Then we need to figure out how many more counts we need to reach 10. You can do this just by simply counting to 10.



As you can see we are 4 places

from 10. 4 is our answer.

