

Name: _____

Date _____

How Many? Step-by-Step Lesson

1) How many ducks are there? _____



Answering #1-

To answer this question we need to count the ducks. The last number tells us how many there are.



The answer is 8.

2) Which picture below shows 9 cupcakes?







Answering #2-

Just like above for number 1, we count the number of cupcakes and the set with 9 cupcakes is the one we are looking for.



Name: _____

Date _____



The answer we are looking for is letter c. It has 9 cupcakes.

