


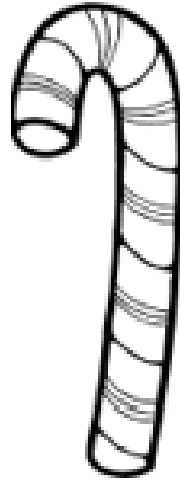
Name: _____

Date _____

Measuring Objects with Paperclips Worksheet

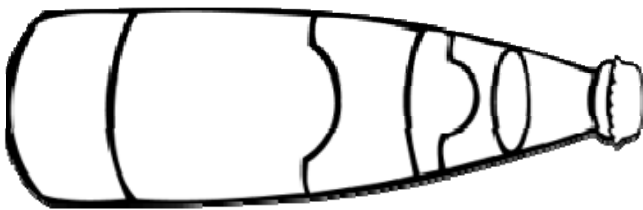
Write the number of paper clips high that each object is below.





How many blocks long is the bottle? _____

--	--	--	--	--	--



Draw set of blocks to make the turtle be four blocks long.

