



Name: \_\_\_\_\_

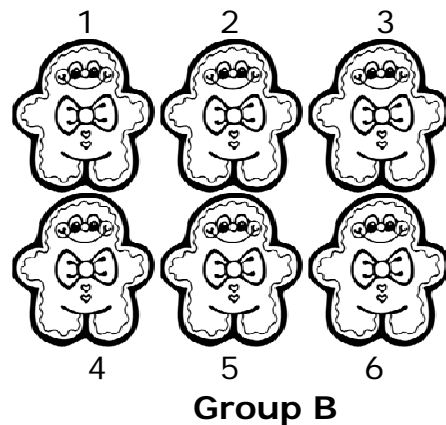

Date \_\_\_\_\_

### Comparing the Number of Objects in a Group Step-by-Step Lesson



1) Which group has more? \_\_\_\_\_

**Answering #1:** To determine this we count the number in each group. The group that has a larger number of objects would be our answer.



Group A has 7. Group B has 6. 7 is a higher (larger) number than 6. Group A with 7 objects has more than group B and is the answer.



Group A



Group B

2) Which Group has less? \_\_\_\_\_



Name: \_\_\_\_\_

Date \_\_\_\_\_

Answering #2 – Count the number of objects. The set of objects with the smaller amount is the answer we are looking for.



**Group A**



**Group B**

Group A has 9 objects. Group B has 5 objects. The question asked for which group has "fewer objects". Group B has less objects than Group A, so Group B is our answer.

