


Name: _____

Date _____

Color More or Less Worksheet

Color the group that has more members.


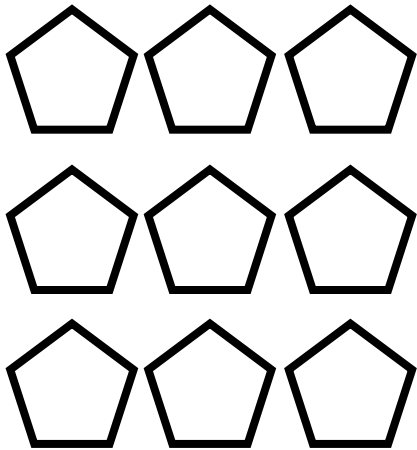


The Tanner Group



The Nelson Group

Which shape has less? _____ Color those shapes.



Michael is starting a lemonade stand. He needs to have 5 lemons to make enough lemonade for the day. Which bag of lemons would have just the right number of lemons to start his stand? Shade in that bag.

