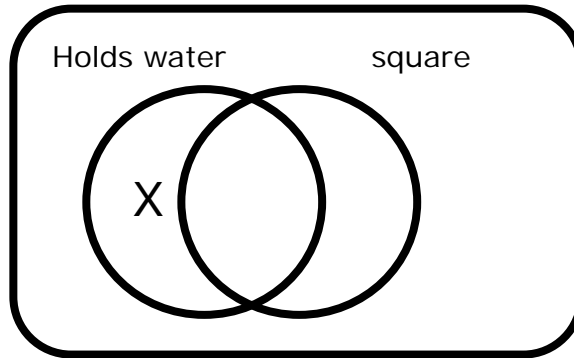


Name: _____

Date _____

Reading Venn Diagrams

A Venn diagram is useful for comparing qualities of an item. In the diagram below we look at a bucket. We are given 2 possible traits of the bucket "Holds water" and "square." A bucket can hold water, but is not a square shape. The "X" is placed in the circle that only shows that the bucket holds water.

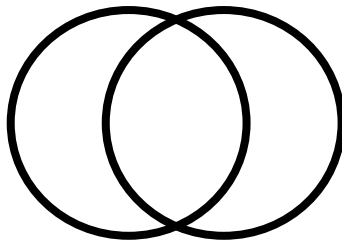


Place the "X" in the correct part of the circle below.

1)



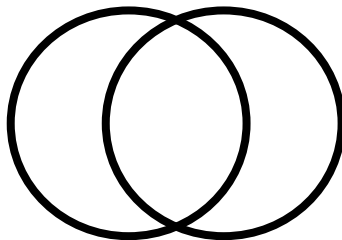
round sports related



2)



flies swims



3)



soft fast

