

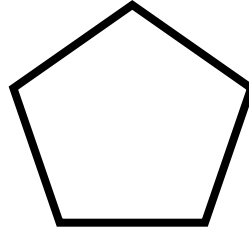
Name: \_\_\_\_\_

Date \_\_\_\_\_


## Number of Corners and Sides Worksheet

Count the number of corners and sides for each shape.


1. \_\_\_\_\_ corners    \_\_\_\_\_ sides



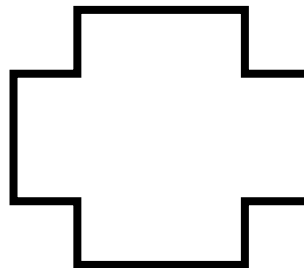
2. \_\_\_\_\_ corners    \_\_\_\_\_ sides



3. \_\_\_\_\_ corners    \_\_\_\_\_ sides



4. \_\_\_\_\_ corners    \_\_\_\_\_ sides



5. \_\_\_\_\_ corners    \_\_\_\_\_ sides

