



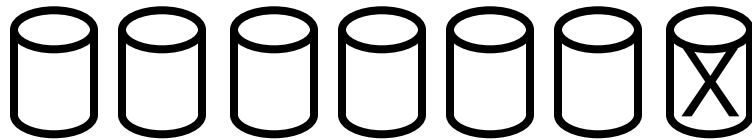




Name: \_\_\_\_\_

Date \_\_\_\_\_

### Match Math Equations to Pictures

Draw a line to match the pictures to the math problem that they show.



$$4 + 5 = 9$$

$$8 - 2 = 6$$

$$2 + 3 = 5$$

$$5 - 2 = 3$$

$$7 - 1 = 6$$

